

LOGICAL REASONING

1. Choose the correct option: - CE, GI, KM, OQ, ?

- a) TW b) TV c) SU d) VW

2. Look at the following pictures. Which is the correct statement about A and B?



A. Tiger



B. Toy

- a) A and B both are tiger.
b) A is living B is non-living.
c) A is a non-living tiger and B is a living tiger.
d) A and B both can hear and feel.

3. Which alphabet comes in the middle of the following given word?

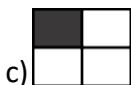
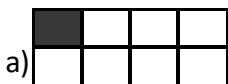
"CONTINGENCY"

- a) T b) G c) N d) I

4. Choose the option which does not match the other:



5. Which figure represents $\frac{1}{3}$ shaded?



SOCIAL STUDIES

6. The name of Earth's satellite is-
a) Moon b) Pluto c) Uranus d) Neptune
7. Who is known as 'Nightingale of India'?
a) Sarojini Naidu b) Miss Mayawati
c) Mrs. Sonia d) Sucheta Kripalani
8. The Earth has _____ satellite.
a) One b) Five c) Ten d) Three
9. We need water for doing-
a) Cooking b) Bathing c) Drinking d) All of these
10. The largest planet in the Solar System is:
a) Mars b) Jupiter c) Saturn d) Mercury
11. The world's smallest continent is:
a) Asia b) Europe c) Antarctica d) Australia
12. The Sahara Desert is located in Africa.
a) True b) False
13. The longest day of the year is:
a) 21 June b) 21 December
c) 21 August d) 23 July
14. The leftover materials from the solar system are known as-
a) Asteroids b) Comets c) Planets d) Stars
15. _____ is used for cough and cold.
a) Rose leaves b) Sunflower leaves
c) Tulsi leaves d) None of these
16. How can we help the environment?
a) Reducing waste b) Reusing waste
c) Recycling waste d) All of these
17. Waste water and human excreta is called-
a) Sewage b) Yield c) Scrap d) None of these

18. Who is known as father of the nation?
a) Mahatma Gandhi b) Subhash Chandra Bose
c) Bal Gangadhar Tilak d) Jawaharlal Nehru
19. How many bones we have in our body?
a) 206 b) 200 c) 306 d) 210
20. Which of the following is NOT a capital city?
a) Dispur b) Amritsar c) Bhopal d) Aizawl
21. Sugarcane is a: -
a) Root b) Fruit c) Flower d) Stem
22. Find odd one out:
a) Dog b) Cat c) Bird d) Boat
23. Which of the following is a plant product but we cannot eat it?
a) Rubber b) Orange c) Cabbage d) Chili
24. A non-living thing: -
a) Can move b) Cannot move
c) Cannot grow d) Both B and C
25. What does a carpenter make?
a) Furniture b) Pot c) Shoes d) Cloth
26. We should help the 'physically challenged person'. Write the meaning of the underlined words.
a) A person who challenge us. b) A person who needs help.
c) A person who is disabled. d) None of these.
27. Water on Earth comes mainly from which of the following?
a) Wells b) Taps c) Rain d) None of these
28. Wet clothes dry under the sun. This is an example of _____.
a) Melting b) Evaporation
c) Boiling d) Condensation
29. Which of the following things people do when they want to relax?
a) Stitches cloth b) Watch T. V.
c) Repair machines d) Make shoes

30. Sumita found some insects on her clothes kept in almirah since six months.

What should she do keep insects away from the clothes?

- a) Keep naphthalene balls with clothes.
- b) Keep dried neem leaves with clothes.
- c) Keep food item with clothes.
- d) Both (a) and (b).

31. In which festival people decorate their house with oil lamp, candles or bulb. What is true about that festival?

- a) People worship goddess Lakshmi at night.
- b) People attends wedding in family.
- c) Children wait for Santa Clause.
- d) People play with gulal and colored water.

32. In hilly areas, houses are made with sloping roofs because it prevents

_____.

- a) Mountain animals from getting into house
- b) Flood water to enter into house
- c) The house from breaking down in storms
- d) Snow from collecting on the roof

33. Living things except plants take _____ for breathing.

- a) Carbon dioxide
- b) Oxygen
- c) Nitrogen
- d) All of these

34. Identify the people with whom you celebrate your birthday.

- a) Friends and family
- b) Strangers
- c) Neighbors
- d) Both (a) and (b)



35. In which state of India is 'Charminar' located?

- a) Karnataka
- b) Hyderabad
- c) Odisha
- d) Tamil Nadu

36. Always walk on the _____ and cross the road at a _____ if there is one.

- a) Footpath, Zebra crossing
- b) Footpath, Subway
- c) Road, Zebra crossing
- d) Road, Footpath

37. Which one of the following birds cannot fly?



38. When you are inside the bus, it is better to _____.

- a) Sit facing forward
- b) Dance on the seat
- c) Run inside the bus
- d) Fight with your friend

39. What does the Ashoka Chakra in the Indian flag represent?

- a) Peace
- b) Progress
- c) Truth
- d) Power

40. Which one is a good habit in public places?

- a) Shouting
- b) Throwing waste
- c) Helping an old person cross the road
- d) Scribbling on walls

41. Which place has many books and is usually quiet?

- a) Playground
- b) Bank
- c) Library
- d) Hospital

42. What should you do if you get lost in a public place?

- a) Start running
- b) Stay calm and ask a security guard for help
- c) Cry loudly
- d) Hide somewhere

43. What should you do when the national anthem is played?

- a) Dance
- b) Sing loudly
- c) Stand still and respectfully
- d) Sit quietly

44. Which of these is the cleanest source of energy?

- a) Coal
- b) Petrol
- c) Solar power
- d) Diesel

45. Why should we save water?

- a) To play with it
- b) So that everyone has enough to drink and use
- c) Because it is free
- d) Because it looks nice

46. Which of the following does NOT help us know directions?
a) Compass b) Map c) Calendar d) Sun
47. Which of these helps in keeping our neighborhood clean?
a) Throwing waste on roads
b) Planting trees and using dustbins
c) Burning leaves in the street
d) Washing vehicles with a pipe continuously
48. Which of these places is the safest during an earthquake?
a) Under a strong table b) Near a window
c) Inside a lift d) On the roof
49. Which of the following is a festival celebrated by Sikhs?
a) Eid b) Christmas c) Baisakhi d) Diwali
50. Which is the smallest unit of society?
a) Village b) Family c) School d) City
-

ANSWER KEY

1	2	3	4	5	6	7	8	9	10
c	b	c	c	d	a	a	a	d	b
11	12	13	14	15	16	17	18	19	20
d	a	a	a	c	d	a	a	a	b
21	22	23	24	25	26	27	28	29	30
d	d	a	d	a	c	c	b	b	d
31	32	33	34	35	36	37	38	39	40
a	d	b	a	b	a	d	a	c	c
41	42	43	44	45	46	47	48	49	50
c	b	c	c	b	c	b	a	c	b