



**Aspire
&
Ignite
Course**

SAMPLE PAPER

SET

(Spectrum Entrance Test)

JEE-Advanced (IIT) | JEE-Main | NEET-UG | MHT-CET | Olympiad | Pre-Foundation

SPECTRUM ENTRANCE TEST

TEST BOOKLET CODE : A

TEST CODE : 2507

Class : X

Date :

Time : 2 Hr.

Max. Marks : 225

INSTRUCTIONS

- 1) This question paper consists of 75 questions divided into three parts:
 - **Part A: Science** – 25 questions
 - **Part B: Mathematics** – 30 questions
 - **Part C: Mental Ability** – 20 questions
- 2) Each question has four options (**A, B, C, and D**), with only one correct answer.
- 3) Marking Scheme:
 - **Correct Answer:** +3 marks
 - **Wrong Answer:** -1 mark
- 4) Before starting, ensure that your question paper contains **all questions and pages**. If you find any missing questions or pages, inform the **invigilator immediately**.
- 5) Mark your answers by **darkening the appropriate bubble** on the OMR sheet.
- 6) Use **only a black or blue ballpoint pen** to fill the bubbles.
- 7) The use of **calculators, log tables, slide rules, and mobile phones** is strictly **prohibited**.
- 8) Example: If only option '**B**' is correct, the correct method for filling the bubble is as follows:

A	B	C	D
<input type="radio"/>	<input checked="" type="radio"/>	<input type="radio"/>	<input type="radio"/>

Any other method (such as putting ⊙, ⊗ partial shading ● etc.) will be considered incorrect.

Name : Reg. No. :

आमच्या खाली दिलेल्या फक्त तीनच शाखा आहेत, या व्यातिरिक्त इतर कुठेही शाखा नाही.

www.spectrumcoaches.com

  /spectrumnashik

Nashik : (Admission Office & Study Center-1)
2nd Floor, Suyojit Avadhoot Tower, Beside Dongare
Vastigrh Ground, Old Gangapur Naka, Nashik

Nashik : (Study Center-2)
2nd Floor, Vasant Market, Beside KVN Naik College,
Canada Corner, Nashik

Nashik Road : (Admission Office & Study Center)
3rd Floor, Star Zone Mall, Above Passport Office,
Nashik-Pune Road, Nashik Road, Nashik

96990 86903 | 70580 70800 | 82628 56898

87882 33216 | 90280 13601

PART A : SCIENCE

Q.1 to Q.25 has four choices (A), (B), (C), (D) out of which only **ONE** is correct.

1. Examine the following elements :

N, O, F, Ne

P, S, Cl, Ar

Br, Kr

In modern periodic table, on which side these elements are placed-

- (A) Top left side (B) Bottom left side (C) Top right side (D) Middle side
2. A saturated hydrocarbon has 50 hydrogen atom. The number of carbon atom in the hydrocarbon will be:
(A) 24 (B) 26 (C) 25 (D) 23
3. Rutherford's alpha-particle scattering experiment was responsible for the discovery of
(A) Atomic Nucleus (B) Electron (C) Proton (D) Neutron
4. Which of the following pairs represents isotones (same no of neutrons)?
(A) ${}_6\text{C}^{12}$, ${}_6\text{C}^{13}$, ${}_6\text{C}^{14}$ (B) ${}_{18}\text{Ar}^{40}$, ${}_{20}\text{Ca}^{42}$, ${}_{21}\text{Sc}^{43}$
(C) ${}_{18}\text{Ar}^{40}$, ${}_{20}\text{Ca}^{40}$, ${}_{21}\text{Sc}^{41}$ (D) ${}_7\text{N}^{14}$, ${}_8\text{O}^{16}$, ${}_9\text{F}^{19}$
5. Dry ice is –
(A) Water in solid state (B) Water in gaseous state
(C) CO_2 in liquid state (D) CO_2 in solid state

ROUGHWORK

6. Name the process by which a drop of ink spreads in a beaker of water –
(A) Diffusion (B) Vaporization (C) Condensation (D) Sublimation
7. Which of the following is not a chemical change-
(A) Electrolysis of water
(B) Boiling of water
(C) Digestion of food
(D) Burning of magnesium ribbon in oxygen to form magnesium oxide.
8. Of these, the metal which occurs in a free state is _____
(A) Na (B) Mg (C) Zn (D) Pt
9. Which of the following statements about the following reactions is correct?
$$\text{ZnO} + \text{CO} \rightarrow \text{Zn} + \text{CO}_2$$

(A) ZnO is being oxidizing (B) CO is being reduced
(C) CO₂ is being oxidized (D) ZnO is being reduced
10. Nitrogen molecule involves formation of
(A) single covalent bond (B) double covalent bond
(C) triple covalent bond (D) ionic bond
11. Graphite is used as a lubricant because it is
(A) greyish black (B) insoluble in water
(C) having high melting point (D) soft, slippery

ROUGHWORK

12. Which of the following is a combustion reaction –
(A) Boiling of water (B) Melting of wax (C) Burning of petrol (D) None of these
13. Two particles are placed at some distance. If the mass of each of the two particles is doubled, keeping the distance between them unchanged, the value of gravitational force between them will be
(A) $\frac{1}{4}$ times (B) 4 times (C) $\frac{1}{2}$ times (D) unchanged
14. If the index finger points towards the north and the middle finger towards the east, by using Fleming's left hand rule what will be the direction of motion or the force acting on the conductor ?
(A) South (B) West (C) Top (D) Bottom
15. A passenger travels along a straight line with velocity v_1 for first half time and with velocity v_2 for next half time, then the mean velocity v is given by,
(A) $v = \sqrt{\frac{v_2}{v_1}}$ (B) $v = \sqrt{v_1 v_2}$ (C) $v = \frac{2v_1 v_2}{v_1 + v_2}$ (D) $v = \frac{v_1 + v_2}{2}$
16. Lungs perform 2.4 J of work during each expansion. How many times do they expand per minute if their power is 2 Watts?
(A) 50 times (B) 40 times (C) 60 times (D) 30 times

ROUGHWORK

17. Total internal reflection occurs when light travels from :
(A) A rare medium to a denser medium and the angle of incidence is less than the critical angle
(B) A denser medium to rarer medium
(C) A rare medium to denser medium
(D) A rarer medium to a denser medium and the angles of incidence is greater than the critical angle
18. A body at rest may have
(A) Potential Energy (B) Kinetic energy (C) Velocity (D) momentum
19. Unit of Density.
(A) kg/m^3 (B) kg m^3 (C) $\frac{\text{m}^3}{\text{kg}}$ (D) none of these
20. An object starts with velocity 5 m/s and after time 10s it has the velocity of 9m/s. Then the displacement is given by
(A) 70 m (B) 90m (C) 20m (D) 0m
21. A car moves from Nagpur to Mumbai (Distance 1000km) and then comes back. Distance and displacement of car is:
(A) 2000 km and 0 km (B) 0 km and 2000 Km
(C) 1000 km and 0 km (D) 0 km and 2000 Km
22. A person holds a mass of 100 Kg for 1 hour. Work done is:
(A) 100 J (B) 6000 J (C) 360000 J (D) Zero

ROUGH WORK

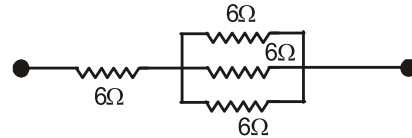
23. Size of object is same as image. Which of the following is possible:
 (A) Convex Mirror, Object at Focus (B) Convex Mirror, Object at Center of Curvature
 (C) Concave Mirror, Object at Focus (D) Concave Mirror, Object at Center of Curvature

24. Which of the following is formula for power loss in resistance?

- (A) IR^2 (B) $\frac{V}{R^2}$ (C) V^2R (D) VI

25. Find equivalent resistance of following circuit.

- (A) 2Ω (B) 4Ω
 (C) 6Ω (D) 8Ω



ROUGH WORK

PART B: MATHEMATICS

Q.26 to Q.55 has four choices (A), (B), (C), (D) out of which only **ONE** is correct.

26. A sphere and cube have the same surface area, the ratio of their respective volumes is
 (A) 4 : 3 (B) $\sqrt{6} : \sqrt{\pi}$ (C) $\sqrt{3} : \sqrt{\pi}$ (D) 22 : 7
27. What is the smallest number which when increased by 5 is divisible by 28, 36, 63 and 108 ?
 (A) 761 (B) 756 (C) 751 (D) 766
28. If $x + y = 5$; then find the value of $x^3 + y^3 + 15xy - 125$
 (A) 5 (B) 0 (C) 1 (D) 25
29. If the hypotenuse of a right angled triangle is 41 cm and the area of the triangle is 180 cm^2 , then the difference between the lengths of the legs of the triangle must be
 (A) 22 cm (B) 25 cm (C) 27 cm (D) 31 cm
30. Which point divides the line segment joining the points $(a+b, a-b)$, $(a-b, a+b)$ in the ratio $a : b$ externally :-
 (A) $\left(\frac{a^2 - 2ab - b^2}{a - b}, \frac{a^2 + b^2}{a - b} \right)$ (B) $\left(\frac{a^2 + 2ab - b^2}{a - b}, \frac{a^2 + b^2}{a - b} \right)$
 (C) $\left(\frac{a^2 + 2ab + b^2}{a - b}, \frac{(a + b)^2}{a - b} \right)$ (D) $\left(\frac{a^2 - 2ab + b^2}{a - b}, \frac{(a + b)^2}{a - b} \right)$

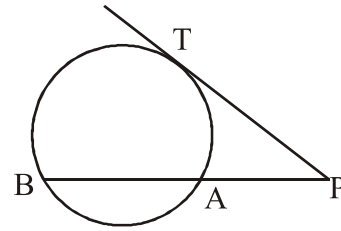
ROUGHWORK

31. If the base of two similar triangles are in the ratio 2 : 3, then their perimeters are in the ratio
(A) 4 : 9 (B) 4 : 5 (C) 2 : 3 (D) 3 : 2
32. Given that $\frac{x}{2} + \frac{y}{4} = k$ and $\frac{2}{x} + \frac{4}{y} = \frac{k}{2}$. What is the value of xy ? (k being a real number)
(A) 1 (B) 4
(C) 16 (D) Cannot be determined unless value of k is known
33. An iron block is of the form of a cylinder of 1.5 m diameter and 3.5 m in length. The block is rolled out into the form of a bar, having a square section of side 5 cm. Find the length of the bar.
(A) 2375 m (B) 2475 m (C) 2575 m (D) 2600 m
34. Four watches are ringing alarm bells in the interval of 6, 12, 15 and 18 seconds. If they start at the same time, how many times they will ring together in 4 hours ?
(A) 80 (B) 81 (C) 20 (D) 21
35. In an examination, 34% of the students failed in Mathematics and 42% failed in English. If 20% of the students failed in both the subjects, then the percentage of students who passed in both the subject was
(A) 44 (B) 50 (C) 54 (D) 56

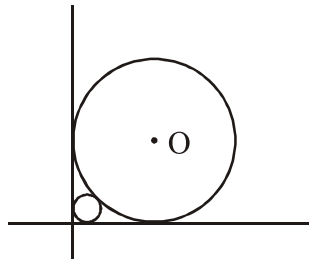
ROUGH WORK

36. In the figure shown, PT and PAB are the tangent and the secant drawn to a circle. If $PT = 12$ cm, $PB = 18$ cm, then AB is

- (A) 16 cm (B) 10 cm
(C) $4\sqrt{5}$ cm (D) 18 cm



37. A circle placed against a right triangle centred at O is the 14 cm radius. What is the radius of the smaller circle placed in the remaining gap ?



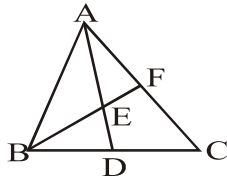
- (A) $7(\sqrt{2} + 1)$ (B) $14(\sqrt{2} - 1)$ (C) $7(\sqrt{2} - 1)^2$ (D) $14(\sqrt{2} - 1)^2$

ROUGHWORK

38. The length, breadth and height of a room are 15 m, 12 m and 5 m respectively. Find the cost of painting the four walls of room at the rate of Rs.100 per m².
 (A) 24000 (B) 26000 (C) 25000 (D) 27000

39. In a ΔABC , D is the mid-point of BC and E is mid-point of AD, BF passes through E. What is the ratio of AF : FC ?

- (A) 1 : 1
 (B) 1 : 2
 (C) 1 : 3
 (D) 2 : 3



40. If $\sqrt{2^n} = 1024$ then $3^{2\left(\frac{n}{4}-4\right)}$
 (A) 3 (B) 9 (C) 27 (D) 81

41. Value of K in $p(x) = x^3 + x + k$ if $(x-1)$ is the factor of $p(x)$ –
 (A) -1 (B) 0 (C) -2 (D) 2

42. Center of a square (point of entersection of digonals of square), with vertices (0, 0), (4, 0), (4, 4), (0, 4) is.
 (A) (1, 1) (B) (2, 2) (C) (3, 3) (D) (4, 4)

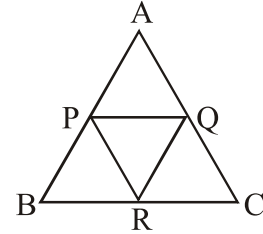
ROUGHWORK

43. If a and b are rational no. and $\frac{\sqrt{5} + \sqrt{3}}{\sqrt{5} - \sqrt{3}} = a + b\sqrt{15}$, then $a + b =$.
(A) 0 (B) 1 (C) 31 (D) 5
44. Find 5th and 6th terms of the arithmetic progression 0, $\frac{1}{4}$, $\frac{1}{2}$, $\frac{3}{4}$,
(A) 1, $\frac{5}{4}$ (B) $\frac{5}{4}$, 1 (C) 1, $\frac{7}{4}$ (D) $\frac{7}{4}$, 1
45. A closed metallic cylindrical box is 1.25 m high and its base radius is 35 cm. If the metal sheet costs Rs. 80 per m^2 , the cost of the material used in the box is _____.
(A) Rs. 281.60 (B) Rs. 290 (C) Rs. 340.50 (D) Rs. 500
46. The value of $4 - \frac{5}{1 + \frac{1}{3 + \frac{1}{2 + \frac{1}{4}}}}$ is
(A) $\frac{40}{31}$ (B) $\frac{4}{9}$ (C) $\frac{1}{8}$ (D) $\frac{31}{40}$

ROUGHWORK

47. C (3, 0) and D (3, 1) are the points of trisection of a line segment AB. Find the respective coordinates of A and B.
 (A) (3, 2), (3, 0) (B) (3, -1), (3, 2) (C) (-3, 1), (3, 2) (D) None of these

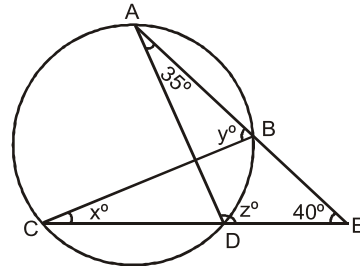
48. ABC is an equilateral triangle of side $4\sqrt{3}$ cm. P, Q & R are midpoints of AB, CA & BC respectively. The area of triangle PQR is (in cm^2)
 (A) $\frac{\sqrt{3}}{4}$ (B) $3\sqrt{3}$
 (C) $2\sqrt{3}$ (D) $\sqrt{3}/2$



49. In a throw of a pair of dice, what is the probability of getting a doublet?
 (A) $\frac{1}{3}$ (B) $\frac{1}{6}$ (C) $\frac{1}{2}$ (D) $\frac{2}{3}$
50. In a pair of fractions, fraction A is twice the fraction B and the product of two fractions is $\frac{2}{25}$. What is the value of fraction A?
 (A) $\frac{1}{5}$ (B) $\frac{1}{25}$ (C) $\frac{2}{5}$ (D) None of these

ROUGHWORK

51. In a circle two chords AB and CD intersect at an external point E. If $\angle A = 35^\circ$, $\angle E = 40^\circ$, $\angle BCD = x^\circ$, $\angle ABC = y^\circ$ and $\angle ADE = z^\circ$, then false statement is :



- (A) $z - y = 30^\circ$ (B) $x - y = 40^\circ$ (C) $x + z = 140^\circ$ (D) $y + z = 180^\circ$
52. If the sum of the zeroes of the quadratic polynomial $f(x) = kx^2 + 2x + 3k$ is equal to their product, find the value of k.

- (A) $\frac{2}{3}$ (B) $\frac{-2}{3}$ (C) $\frac{5}{6}$ (D) $\frac{-5}{6}$

53. $\sqrt{3 + \sqrt{5}} =$

- (A) $\sqrt{2} + 1$ (B) $\sqrt{\frac{5}{2}} + \sqrt{\frac{1}{2}}$ (C) $\sqrt{\frac{7}{2}} - \sqrt{\frac{1}{2}}$ (D) $\sqrt{\frac{9}{2}} - \sqrt{\frac{3}{2}}$

ROUGHWORK

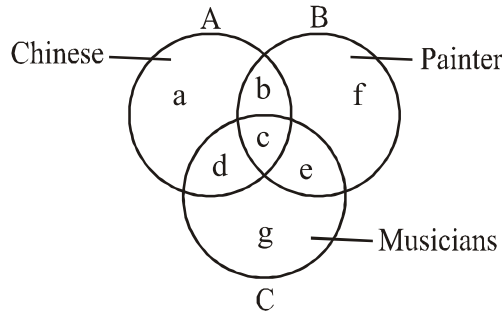
54. $P = 2(4)(6) \dots(20)$ and $Q = 1(3)(5) \dots(19)$. What is the HCF of P and Q?
(A) $3^3 5$ (B) $3^4 5$ (C) $3^4 5^2 7$ (D) $3^3 5^2$
55. The curved surface area of a cone of height 12 cm and base radius 5 cm is.
(A) $715/7$ (B) $1430/7$ (C) 1430 (D) 715

ROUGH WORK

PART C: MENTAL ABILITY

Q.56 to Q.75 has four choices (A), (B), (C), (D) out of which only **ONE** is correct.

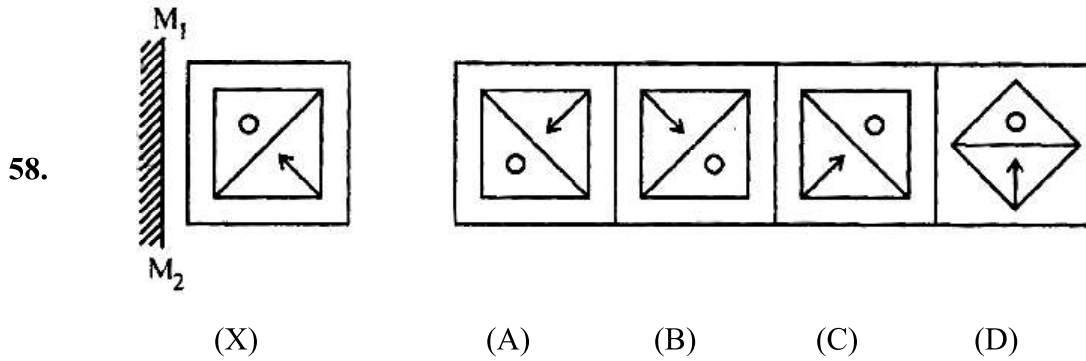
Directions (Q.56 & 57) : In the figure given below, there are three intersecting circles each representing certain section of people. Different regions are marked a - g. Read the statements in each of the following questions and choose the letter of the region which correctly represents the statements.



56. Painters who are neither Chinese nor musicians
 (A) b (B) c (C) f (D) g
57. Chinese who are painters as well as musicians
 (A) a (B) b (C) c (D) d

ROUGHWORK

Direction (Q.58) : In each of the following questions, choose the correct mirror-image of the Fig. (X) from amongst the four alternatives (1), (2), (3) and (4) given along with it. The mirror represented by a line M_1M_2



Direction (Q.59 to 61) : Study the following information carefully and answer the questions below.

A team of five is to be selected from amongst five boys A, B, C, D and E and four girls P, Q, R and S.

Some criteria for selection are –

A and S have to be together.

P cannot be put with R.

D and Q cannot go together.

C and E have to be together.

R cannot be put with B.

Unless otherwise started, these criteria are applicable to all questions below

59. If two of the members have to be boys, the team will consist of
 (A) ABSPQ (B) ADSQR (C) BDSRQ (D) CESPQ

ROUGHWORK

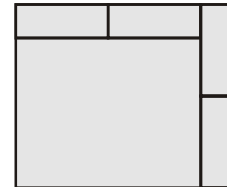
60. If two of the members are girls and D is one of the members, the members of the team other than D are
 (A) PQBC (B) PQCE (C) PSAB (D) PSCE
61. If including P at least three members are girls, the members of the team other than P are
 (A) QSAB (B) QSBD (C) QSCE (D) RSAD

Direction (Q.62 & 63) : In each of the following questions, one term in the number series is wrong. Find out the wrong term.

62. 6, 15, 35, 77, 165, 221
 (A) 35 (B) 77 (C) 165 (D) 221
63. 2, 6, 24, 96, 285, 568, 567
 (A) 6 (B) 24 (C) 285 (D) 567

64. What is the number of rectangles in the following figure?

- (A) 6 (B) 7
 (C) 9 (D) 11

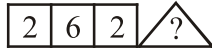
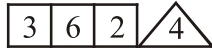
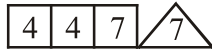


Direction (Q.65) : In each of the following questions, choose that set of numbers from the four alternative sets, that is similar to the given set.

65. Given set : (6, 36, 63)
 (A) (7, 49, 98) (B) (8, 64, 46) (C) (9, 84, 45) (D) (11, 111, 84)

ROUGHWORK

66. Which one will replace the question mark?



- (A) 2 (B) 4 (C) 6 (D) 8

67. How many times do the hands of a clock coincide in a day?

- (A) 20 (B) 21 (C) 22 (D) 24

Direction (Q.68) : In the following question there are equations that have become wrong due to wrong order of signs. Choose the correct order of signs from the four alternatives given below. So that the equations become right.

68. $8 = 2 + 4 - 16$

- (A) $\times + =$ (B) $\div \times =$ (C) $- + =$ (D) $\times \div =$

Direction (Q.69) : In each blank space write one of +, -, × and ÷ signs so that the equation is true.

69. $15 \ 5 \ (15 \ 3) = 80$

- (A) $\times, \div, +$ (B) $\times, \div, -$ (C) $\times, +, \div$ (D) $\times, -, \div$

70. Nine carpenters can make nine chairs in nine days, then one carpenter will make three chairs in how many days?

- (A) 3 (B) 9 (C) 27 (D) 18

ROUGH WORK

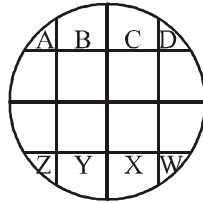
Directions (Q.71) : Study the following information and answer the questions given below:

- (i) A rectangular wooden block is having length 6 cm, breadth 4 cm and height 1 cm.**
- (ii) Both sides having dimension 4 cm. 1 cm are painted with black colour.**
- (iii) Both sides having dimension 6 cm. 1 cm are painted in red colour.**
- (iv) Both sides with dimension 6 cm. 4 cm are painted in green colour.**
- (v) The block is cut into size equal pairs of 1 cm each (from 6 cm side) and into 4 equal parts of 1 cm each (from 4 cm side).**

- 71.** If cubes having only "black as well as green" colour are removed, then how many cubes will remain?
(A) 4 (B) 8 (C) 12 (D) None of these

ROUGH WORK

Directions (Q.72 to 74) : A posse of four policeman. A, B, C and D is combining a circular park divided into sixteen plots. P, Q, R and K are the offenders whom they have to catch after given moves. The figure below shows their positions. Note that the by-lanes are North-South and East-West.



72. Who two are positioned North-West and South-East ?
 (A) W and A (B) B and Y (C) A and W (D) Z and D
73. If A, B, C and D were to move clockwise four plots and W, X, Y and Z were to move anti-clockwise six plots, then who two would be in North and South directions respectively ?
 (A) B and X (B) Y and D (C) Z and A (D) W and C
74. If both A, B, C, D and P, Q, R, K move clockwise three plots, then who two would be positioned North-East and South-West ?
 (A) A and W (B) B and X (C) C and X (D) D and Z

ROUGHWORK

Direction (Q.75) : There is some relationship between the two terms to the left of :: and the same relationship holds between the two terms to its right. Find out this term.

75. $MK : \frac{169}{121} :: JH : ?$

(A) $\frac{100}{64}$

(B) $\frac{100}{81}$

(C) $\frac{64}{120}$

(D) $\frac{81}{100}$

ROUGHWORK

Answer Key : Spectrum Sample Test Paper

Target : Engineering

	1	2	3	4	5	6	7	8	9	10	11	12	13
Ans.	C	A	A	B	D	A	B	D	D	C	D	C	B
Que.	14	15	16	17	18	19	20	21	22	23	24	25	26
Ans.	C	D	A	B	A	A	A	A	D	D	D	D	B
Que.	27	28	29	30	31	32	33	34	35	36	37	38	39
Ans.	C	B	D	A	C	C	B	B	A	B	D	D	B
Que.	40	41	42	43	44	45	46	47	48	49	50	51	52
Ans.	B	C	B	D	A	A	C	B	B	B	C	B	B
Que.	53	54	55	56	57	58	59	60	61	62	63	64	65
Ans.	B	C	B	C	C	C	A	C	A	C	B	C	B
Que.	66	67	68	69	70	71	72	73	74	75			
Ans.	C	C	B	C	C	D	C	B	A	A			

🌐 www.spectrumcoaches.com

✉ info@spectrumcoaches.com

Follow us on



/spectrumnashik

TRUST | QUALITY | RESULT
SINCE 2010



Study Centers : आमच्या फक्त खालील तीन शाखा आहेत, इतर कुठेही नाही.

📍 **Nashik Road** : (Admission Office & Study Center)

3rd Floor, Star Zone Mall, Above Passport Office, Nashik-Pune Road, Nashik Road, Nashik

Mob : 8788233216 | 9028013601

📍 **Nashik** : (Admission Office & Study Center-1)

2nd Floor, Suyojit Avadhoot Tower, Beside Dongare
Vastigruh Ground, Old Gangapur Naka, Nashik

📍 **Nashik** : (Study Center-2)

2nd Floor, Vasant Market, Beside KVN Naik College,
Canada Corner, Nashik

Mob : 9699086903 | 7058070800 | 8262856898