

SCHOLARSHIP *Cum* ADMISSION TEST

Sunday,
31st December 2023

For Grades III to XI


Appearing for Class IV

Scholarship Aspirants Today
Victors in Life Tomorrow !

At **RPS** Excellence is a HABIT

JEE ADVANCED-2023

NEET -2023



SUPER ACHIEVEMENTS OF **RPS** GROUP OF SCHOOLS
Session: 2023-24



SPACE FOR ROUGH WORK



APPEARING FOR CLASS IV

EVS:- 1-20

English: 21-40

Mathematics: 41-60

TIME:- 90 Minutes

M.M. :-60

Student's Name:Father's Name: Mobile No.:

Address

Present School:

General Instructions:

1. Duration of Test is 90 minutes and Question Paper contains 60 Questions with maximum 60 marks.
2. Use of gadgets is not allowed.
3. Student should abide by the instructions issued during the examination by the invigilator or the centre incharge.
4. Before attempting the question paper ensure that it contains all the pages and that no question is missing.
5. There is No Negative marking.

Correct Method



Wrong Method



EVS (20 Marks)

Q1. _____ are three children born almost at the same time to the same mother.

- (a) Twins (b) Triplets (c) Quadruplets (d) Quints

Q2. Who uses Braille script?

- (a) Deaf (b) Mute (c) Dumb (d) Blind

Q3. Complete the analogy.

Cobbler : Shoes :: _____ : Fruits and Vegetable.

- (a) Greengrocer (b) Grocer (c) Tailor (d) Barber

Q4. Which of the following is a group of traditional games?

- (a) Kabaddi, Taekwondo
(b) Kho –Kho , Kabaddi
(c) Karate , Gymnastics
(d) Kho –Kho, Football

Q5. Which among the following is a creeper?

- (a) Money plant (b) Pea Plant (c) Grapevine (d) Watermelon

Q6. Which gas is used by plants during photosynthesis?

- (a) Nitrogen (b) Oxygen (c) Carbon dioxide (d) Helium

Q7. Which of the following is an amphibian?

- (a) Frog (b) Crocodile (c) Shark (d) Polar bear

Q8. Which among the following can eat wood and damage wooden furniture?

- (a) Spider (b) Ant (c) Wasp (d) Termite

Q9. What is the full form of CNG?

- (a) Centralized Natural Gas (b) City Natural Gas
(c) Converted Natural Gas (d) Compressed Natural Gas

Q10. Which of the following beaks is kite most likely to have?

- (a) Spear like beak (b) Hooked beak (c) Tubular beak (d) Conical beak

Q11. Which of the following nutrients is present in pulses?

- (a) Carbohydrates (b) Vitamins (c) Proteins (d) Fats

Q12. Which type of house is found in areas with heavy rainfall?

- (a) Stilt (b) Igloo (c) Tent (d) Caravan

Q13. Which instrument is used to measure amount of rainfall in an area?

- (a) Thermometer (b) Rain gauge (c) Barometer (d) Ammeter

Q14. Which is the darkest layer of soil?

- (a) Humus (b) Top soil (c) Sub soil (d) Bed rock

Q15. Which code uniquely identifies an area?

- (a) IFSC (b) OTP (c) PIN (d) UIN

Q16. The process of changing water vapours into water on cooling is called_____.

- (a) Evaporation (b) Condensation (c) Precipitation (d) Water Cycle

Q17. Which among the following is a root?

- (a) Onion (b) Potato (c) Radish (d) Ginger

Q18. Idli and Momos are cooked by _____.

- (a) Roasting (b) Steaming (c) Boiling (d) Frying

Q19. Which of the following is a medicinal plant?

- (a) Tulsi (b) Neem (c) Both (a) and (b) (d) None of these

Q20. Which body part of insect is used for smelling?

- (a) Antennae (b) Abdomen (c) Thorax (d) Nose

ENGLISH (20 Marks)

Read the passage and answer the following questions. (Direction Q21 – Q24)

I am George. I am at the circus with my friends. My father bought us 5 tickets for the circus yesterday. We saw 3 clowns with fancy dresses. Then we saw a monkey doing stunts on the rope. We are all laughing and enjoying.

Q21. George went to the circus with _____.

- (a) parents (b) aunt (c) friends (d) sister

Q22. How many tickets did George's father bring?

- (a) 1 (b) 5 (c) 8 (d) 10

Q23. What did George see there?

- (a) clowns (b) lion (c) girl (d) boys

Q24. A monkey was doing stunts on the _____.

- (a) cycle (b) road (c) rope (d) park

Q25. Identify the adverb.

The old man walked slowly.

- (a) man (b) walked (c) slowly (d) old

Q26. Choose the appropriate homophone for the given blank.

Who got the Nobel Prize for _____ last year?

- (a) Piece (b) Peace (c) Peas (d) Both a and b

Q27. Choose the synonym for the underlined word.

Certainly, you are right.

- (a) surely (b) fortunately (c) luckily (d) easily

Q28. Identify the kind of verb for the underlined verb.

Author writes essays and stories.

- (a) helping verb (b) action verb (c) linking verb (d) none of the above

Q29. Choose the correct option.

He is _____ honest man.

- (a) a (b) an (c) the (d) none of the above

Q30. Choose the correct plural form of the noun "*man*".

- (a) man (b) men (c) mans (d) mens

Q31. Identify pronoun.

You live near the school building.

- (a) you (b) live (c) near (d) the

Q32. Match the following with suitable pair.

- | | |
|--------------|----------------------|
| (P) Mumbai | (i) common noun |
| (Q) wood | (ii) material noun |
| (R) army | (iii) proper noun |
| (S) children | (iv) collective noun |

(a) P – iii, Q- ii, R – iv, S - i

(b) P – ii, Q- i, R – iv, S- iii

(c) P – iii, Q- ii, R – i, S- iv

(d) P – iv, Q- iii, R – ii, S- i

Q33. Choose the antonym of the word “injure”.

- | | | | |
|------------|------------|----------|------------|
| (a) better | (b) create | (c) heal | (d) remind |
|------------|------------|----------|------------|

Q34. Choose the correct spelling of the word that means 'a person who is against something'.

- | | | | |
|--------------|--------------|--------------|--------------|
| (a) opponent | (b) oppenent | (c) oppinent | (d) oppanent |
|--------------|--------------|--------------|--------------|

Q35. Choose the correct option for the underlined word.

Mohan made tomato soup for the whole family.

- | | | | |
|------------|---------------|----------|----------|
| (a) Adverb | (b) adjective | (c) noun | (d) verb |
|------------|---------------|----------|----------|

Q36. Choose the correct option.

He is injured _____ he cannot run.

- | | | | |
|------------|---------|--------|--------|
| (a) though | (b) but | (c) as | (d) so |
|------------|---------|--------|--------|

Q37. Identify adjective.

Her father is a very intelligent doctor.

- | | | | |
|------------|------------|-----------------|----------|
| (a) father | (b) doctor | (c) intelligent | (d) very |
|------------|------------|-----------------|----------|

Q38. The house at the end of this lane is theirs. Identify pronoun.

- | | | | |
|-----------|---------|----------|------------|
| (a) house | (b) the | (c) lane | (d) theirs |
|-----------|---------|----------|------------|

Q39. I left my textbook _____ the chair.

- | | | | |
|--------|--------|--------|--------|
| (a) at | (b) on | (c) up | (d) in |
|--------|--------|--------|--------|

Q40. Choose the correct option.

The children are playing in the park_____.

- | | | | |
|-----------|---------------|-------------|-------------|
| (a) happy | (b) happiness | (c) happily | (d) happier |
|-----------|---------------|-------------|-------------|

MATHEMATICS (20 Marks)

Q41. Complete the series with the correct option.

VII, IX, XI, XIII, XV, ____.

- (a) XVIII (b) XVII (c) XIII (d) none of these

Q42. What is the face value and the place value of 5 in 752.

- (a) 5,50 (b) 5,5 (c) 50,5 (d) none of these

Q43. Write the number name for the numeral 419.

- (a) Four thousand nineteen. (b) Four hundred nineteen.
(c) Four hundred nine. (d) Four thousand nine.

Q44. Write the following numbers in ascending order.

356, 350, 305

- (a) 356, 350, 305 (b) 350,356,305 (c) 305,350,356 (d) 350, 305, 356

Q45. Form the smallest 4-digit number using all the digits.

5, 4,9, 8

- (a) 4589 (b) 5894 (c) 4985 (d) 3549

Q46. Find the missing number $445 + \underline{\hspace{2cm}} = 766$.

- (a) 322 (b) 321 (c) 329 (d) 221

Q47. Find the missing digit.

$$\begin{array}{r} 9 \quad 0 \quad 6 \\ - 5 \quad \square \quad 5 \\ \hline 3 \quad 5 \quad 1 \end{array}$$

- (a) 0 (b) 4 (c) 5 (d) 3

Q48. What should be multiplied with the number 7500 to get zero?

- (a) 0 (b) 4 (c) 1 (d) 3

Q49. Arrange 56 mangoes in 7 groups. How many mangoes do each group contain?

- (a) 7 mangoes (b) 8 mangoes (c) 2 mangoes (d) 4 mangoes

Q50. Choose the objects which have curved surface?

- (a) Book, Black- Board (b) Pencil box, Dice
(c) Cricket ball, Orange (d) Bat, Chair

Q51. A cuboid has _____ edges, _____ vertices, _____ faces.

- (a) 12,8,6 (b) 5,5,4 (c) 10,4,5 (d) 13,15,1

Q52. Geeta bought 12 notebooks for ₹ 216. What is the price of one notebook?

- (a) ₹ 15 (b) ₹ 16 (c) ₹ 18 (d) ₹ 14

Q53. How many grams does four kilogram has?

- (a) 400 gm (b) 4000 gm (c) 4 gm (d) 6 gm

Q54. What is the difference between 9:30 am and 11:00 am?

- (a) 2 hours (b) 1 hour 30 min (c) 1 hour (d) 5 hours

Q55. Writing, Seventy five and two hundredth in decimals, we get.

- (a) 0.752 (b) 75.2 (c) 75.002 (d) 75.02

Q56. Find the missing.

$$3 \times 6 : 6 \times 3 :: 7 \times 4 : ?$$

- (a) 4×7 (b) 7×3 (c) 6×3 (d) 4×9

Q57. There are 4530 girls and 3428 boys in a school. How many students are there altogether?

- (a) 7588 (b) 7958 (c) 7857 (d) 3945

Q58. The difference between the place value of 6 and 9 in the number 6593 is.

- (a) 5910 (b) 5901 (c) 9510 (d) 4321

Q59. There are 7 days in a week. How many days are there in 34 weeks?

- (a) 380 days (b) 238 days (c) 382 days (d) 391 days

Q60. The product of two numbers is 2979. If one of the numbers is 9, then the other number is.

- (a) 331 (b) 124 (c) 133 (d) 253



SPACE FOR ROUGH WORK

JEE ADVANCED-2023

RPSians Add Another Glorious Chapter to
the Spectacular Saga of

NEET -2023

CLAT-2023



CBSE Class XII -2023

97% & ABOVE
37+
STUDENTS

95% & ABOVE
144+
STUDENTS

90% & ABOVE
484+
STUDENTS

80% & ABOVE
1316+
STUDENTS

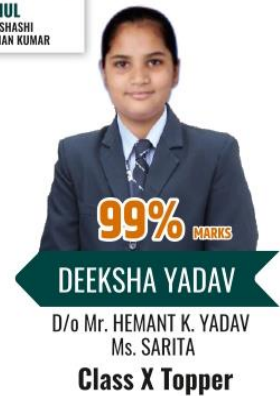
CBSE Class X -2023

97% & ABOVE
96+
STUDENTS

95% & ABOVE
311+
STUDENTS

90% & ABOVE
918+
STUDENTS

85% & ABOVE
1429+
STUDENTS



SPORTS ACHIEVEMENTS



1st Position
CBSE Cluster XV Athletics



2nd Position
CBSE Volleyball Cluster



2nd Position (Girls)
CBSE Basketball Cluster

SUPER ACHIEVEMENTS OF RPS GROUP OF SCHOOLS

Session: 2023-24



Our Campuses: Mahendergarh Ph.:01285-222645, 9416150201 | Rewari Ph.:8222000359 | Rewari City Ph.:9053555526 | Dharuhera Ph.:9467064534 | Kosli Ph.:9255148141 | Behror Ph.:9529678004 | Hansi Ph.:9813196969, 9896100407 | Narnaul Ph.: 8198976666 | Hisar Ph.:8307760465 | Gurugram Sec.-50 Ph.:8409989898, 7827466258 | Gurugram Sec.-89 Ph.:8222999182 | Karnal Ph.:8398000304/06 | Dharuhera Campus-2 Ph.: 01274-295 925/824, 09257133925 | Rohtak Ph.: 7419998800 | Dadri Ph.: 8222048283, 84 | Kanina Ph.:9350693853, 9671720807 | Gurugram, Sec.-50, Rosewood Campus-2: Ph.: 70424 96986

Top-Notch **Hostel Accommodation** for **Boys and Girls** at M/GARH, KANINA, BEHROR, KOSLI & HANSI CAMPUSES