

# RPS GROUP OF SCHOOLS

## ADMISSION- *Cum* -SCHOLARSHIP TEST

For Grade III to XI

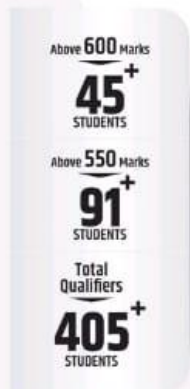
Sunday, 1<sup>st</sup> January 2023

**APPEARING FOR CLASS IV**

**SCHOLARSHIP ASPIRANTS TODAY  
VICTORS IN LIFE TOMORROW !**

*At* **RPS** *Excellence is a* **HABIT**

NEET TOPPER



IIT-JEE TOPPER



**OUR RESULTS SPEAK LOUDER THAN WORDS**

**SESSION 2022-23**



## APPEARING FOR CLASS IV

**EVS:- 1-20**

**English: 21-40**

**Mathematics: 41-60**

**TIME: 90 Minutes**

**M.M. 60**

Student's Name: .....Father's Name: ..... Mobile No.: .....

Address .....

Present School: .....

### General Instructions:

1. Duration of Test is 90 minutes and Question Paper contains 60 Questions with maximum 60 marks.
2. Use of gadgets is not allowed.
3. Student should abide by the instructions issued during the examination by the invigilator or the centre incharge.
4. Before attempting the question paper ensure that it contains all the pages and that no question is missing.
5. There is No Negative marking.

*Correct Method*



*Wrong Method*



### EVS(20 Marks)

**Q1. Aeroplanes : airports :: Ships : \_\_\_\_\_**

- (a) Parking lots      (b) Harbours      (c) Railway station      (d) Bus stand

**Q2. Identify the sign of zebra crossing from the following signs.**

- (a)       (b)       (c)       (d) 

**Q3. Which of the following parts of a plant remains under the ground?**

- (a)       (b)       (c)       (d) 

**Q4. What does WWW stand for?**

- (a) Wet Wild Web      (b) World Wide Web  
(c) World Wild Web      (d) Wild Wet Web

**Q5. You cannot send an E-mail without \_\_\_\_\_.**

- (a) a telephone      (b) a television      (c) a computer      (d) internet

**Q6. Cotton clothes are preferred during the summer because these clothes \_\_\_\_\_**

- (a) do not absorb sweat.      (b) absorb heat  
(c) absorb sweat easily.      (d) do not allow the body heat to escape.

**Q7. People living in plains usually make \_\_\_\_\_.**

- (a) a house with sloping roof



- (b) a house with flat roof



- (c) a house boat



- (d) a tent



**Q8. Shivam is the brother of Rupa and father of Rahul. What will Rahul call Rupa?**

- (a) Grandmother      (b) Mother      (c) Aunt      (d) Sister

**Q9. Which option will replace 'if' in the table?**

<b>Fruits</b>	Apple	Grapes
<b>Pulses</b>	Rajma	Gram
<b>Cereals</b>	Wheat	'if'

- (a) Moong Dal      (b) Beans      (c) Potato      (d) Rice

**Q10. Match some occupations with their machines or instruments and select the correct option.**

**List I**

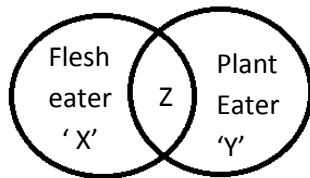
- A. Doctor  
B. Mechanic  
C. Barber

**List II**

1. Scissors  
2. Stethoscope  
3. Machines & Ranges

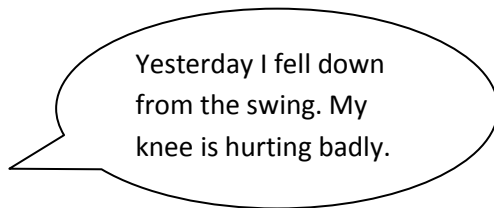
- (a) A-1      B-2      C-3  
(b) A-2      B-1      C-3  
(c) A-2      B-3      C-1  
(d) A-3      B-1      C-2

**Q11. Study the given diagram and select the correct option that can fill spaces 'X', 'Y', 'Z'.**

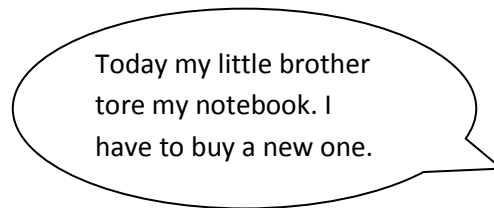


- |     | <b>X</b> | <b>Y</b> | <b>Z</b> |
|-----|----------|----------|----------|
| (a) | Wolf     | Lion     | Cow      |
| (b) | Camel    | Cat      | Lion     |
| (c) | Lion     | Cow      | Duck     |
| (d) | Bat      | Deer     | Lion     |

**Q12. Read the conversation between two friends. Which of the following person should they visit?**



**Rahul**



**Riya**

Rahul	Riya
(a) Greengrocer	Plumber
(b) Plumber	Stationer
(c) Doctor	Stationer
(d) Greengrocer	Doctor

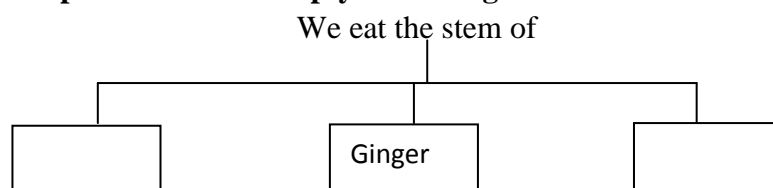
**Q13. Group 1: Lion, Bear, Tiger, Elephant**

**Group 2 : Ox, Cow, Horse**

**Which of the following is correct about the given group of animals?**





- (a) Group 1: Domestic animals      Group 2 : Wild animals
- (b) Group 1: Wild animals      Group 2 : Domestic animals
- (c) Both Group 1 and Group 2 have domestic animals.
- (d) Both Group 1 and Group 2 have wild animals.

**Q14. Select the correct option to fill the empty boxes of given flow chart.**



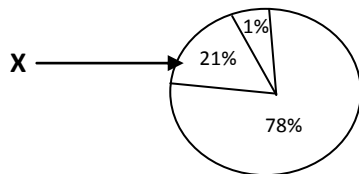
- (a) Turnip & radish      (b) Sugarcane & carrot
- (c) Potato & Sugarcane      (d) Turnip & Spinach

**Q15. Match the list I with the list II and select the correct option.**

List I		List II	
A		1	Summer
B		2	Winter
C		3	Monsoon
D		4	Autumn

- |     |   |   |   |   |     |   |   |   |   |
|-----|---|---|---|---|-----|---|---|---|---|
|     | A | B | C | D |     | A | B | C | D |
| (a) | 3 | 1 | 2 | 4 | (b) | 1 | 2 | 3 | 4 |
| (c) | 4 | 3 | 2 | 1 | (d) | 1 | 4 | 2 | 3 |

**Q16. Which component of air is represented by X in the figure below?**



- (a) Oxygen                      (b) Nitrogen                      (c) Carbon dioxide                      (d) Neon

**Q17. Which gas cylinders are carried by mountaineers when they climb on mountains?**

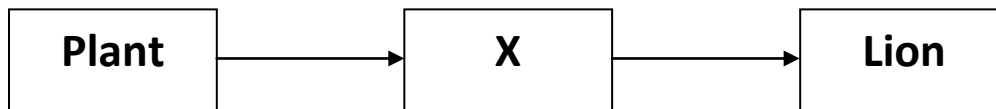
- (a) Carbon dioxide                      (b) Oxygen                      (c) Nitrogen                      (d) Helium

**Q18. Match the following and choose the correct option.**

List I		List II	
A.	We all need food	1.	cannot move on its own.
B.	A table in your room	2.	to prepare their food.
C.	Plants need sunlight, air and water	3.	to grow.

- |     |   |   |   |
|-----|---|---|---|
|     | A | B | C |
| (a) | 3 | 1 | 2 |
| (b) | 2 | 3 | 1 |
| (c) | 1 | 2 | 3 |
| (d) | 2 | 1 | 3 |

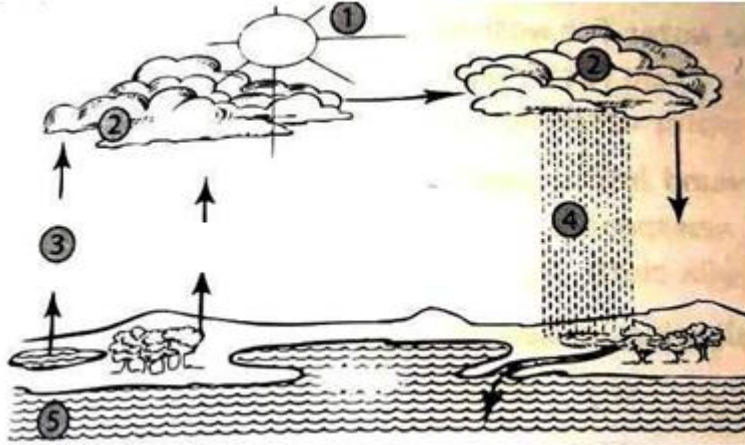
**Q19. Study the following chart:**



The arrow means 'is eaten by'. Which of the following animals can X be?

- (a) Frog                      (b) Eagle                      (c) Goat                      (d) Snake

**Q20. Look at the water cycle below and answer the following question.**



In the figure what process is depicted by (3)?

- (a) Condensation              (b)Evaporation              (c) Cloud formation              (d) Precipitation

### **ENGLISH (20 Marks)**

**Choose correct options to fill in the blanks:–**

**Q21. Yesterday \_\_\_\_\_ European visitor came to our school.**

- (a) a                      (b) an                      (c) the                      (d) both a and c

**Q22. Can you give me \_\_\_\_\_ book which you were reading yesterday?**

- (a) a                      (b) an                      (c) the                      (d) both b and c

**Q23. He wakes up \_\_\_\_\_ 10 a.m. and works from 11 a.m. \_\_\_\_\_ 5 p.m.**

- (a) at ,from              (b) on, to                      (c) at, to                      (d) on, at

**Q24. She lived in England \_\_\_\_\_ 2010 \_\_\_\_\_ 2018.**

- (a) from, in              (b) to, in                      (c) in, to                      (d) from, to

**Q25. Which of the following is a proper noun?**

- (a) City                      (b) Paris                      (c) Indore                      (d) both b and c

**Q26 . How many nouns have been used in the following sentence :-**

**Yuvraj is a cricketer who plays for India.**

- (a) Three                      (b) Two                      (c) Four                      (d) One

**Q27. Choose that part of the sentence which do not have the correct pronoun :-**

**David is                      sick.                      She will not                      come to school.**

1                                      2                                      3                                      4

- (a) 4                      (b) 3                      (c) 1                      (d) 4

**Q28. Identify the kind of pronoun for the underlined word :-**

**Clean the board. It is very dirty.**

- (a) Possessive Pronoun (b) Personal Pronoun (c) Demonstrative Pronoun (d) None of these

**Q29. Choose correct verb to fill in the blank.**

**The police was \_\_\_\_\_ for the thieves.**

- (a) look (b) hearing (c) smelling (d) searching

**Q30. Select the odd one among the following:-**

- (a) Juggle (b) Prepare (c) Make (d) Never

**Q31. Identify the noun which is being described by the underlined word :-**

**My grandmother has a wonderful old Italian clock.**

- (a) grandmother (b) old (c) Italian (d) clock.

**Q32. Choose correct options to fill in the blanks:- (Q32-33)**

**He waited \_\_\_\_\_ for his mother.**

- (a) patiently (b) everywhere (c) honestly (d) both a And c

**Q33. Mary was so tired \_\_\_\_\_ she could scarcely stand.**

- (a) which (b) that (c) because (d) but

**Q34. Choose the correct synonym of the word given in CAPITAL letters :-**

**DEED**

- (a) derive (b) work (c) overcome (d) suspend

**Q35. Choose the correct antonym of the word, given in CAPITAL letters -**

**IGNORE**

- (a) blink (b) avoid (c) hate (d) attend.

**Q36. Arrange P,Q,R,S to form a meaningful sentence:-**

P: quick Q: bath R: I need S: to have a

- (a) RSQP (b) SRPQ (c) RSPQ (d) PQRS

**Q37. Choose correct answer for the given riddle:-**

**I have a tail. I have no body but I have a head.**

- (a) Monkey (b) Frog (c) Coin (d) both a and c

**Q38. Choose the option in which the sentence is written correctly:-**

- (a) I sleeps in my brother room.  
(b) I sleeps into my brother's room.  
(c) I sleep in my brother's room.  
(d) I sleep in my brothers room.

**Q39. Arrange the following letters to make a meaningful word:-**

**DRG AU**

- (a) Garud (b) Gaurd (c) Guard (d) Gurad

**Q40. Choose correct word for the given statement: -**

**That which is against the law is \_\_\_\_\_.**

- (a) lawful (b) legal (c) illegal (d) All of these



# MATHEMATICS (20 Marks)

Q41. If  $\bigcirc$  = 1 whole, then  $\bigcirc + \bigcirc + \bigcirc$  is equal to which one of the following ?

- (a)  $3\frac{1}{2}$                       (b)  $5\frac{1}{2}$                       (c)  $2\frac{1}{2}$                       (d)  $2\frac{1}{4}$

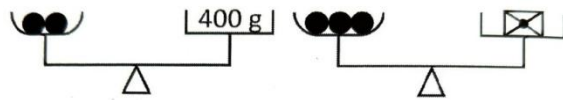
Q42. 36 notebooks are placed equally in 9 boxes. How many notebooks are there in one box?

- (a) 3                      (b) 4                      (c) 7                      (d) 5

Q43. If 17 bricks weigh 170 kg, find the weight of 10 bricks.

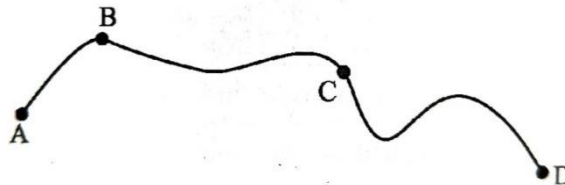
- (a) 16 kg                      (b) 80 kg                      (c) 100 kg                      (d) 90 kg

Q44. How heavy is  $\boxtimes$ ?



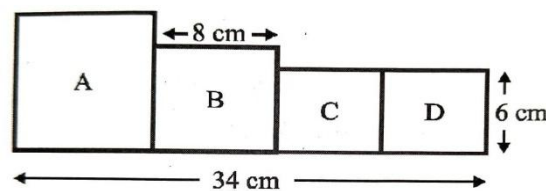
- (a) 400 g                      (b) 200 g                      (c) 600 g                      (d) 800 g

Q45. The rope shown below is marked at four points named as A, B, C and D. The length between point A and D is 3080 m. If the length between A and B is 720 m and length between C and D is 1120 m, then find the length between B and C.



- (a) 1140 m                      (b) 1213 m                      (c) 470 m                      (d) 1240 m

Q46. Following figure is made up of 4 squares. Find the length of one side of square A if C and D are identical.



- (a) 12 cm                      (b) 94 cm                      (c) 14 cm                      (d) 85 cm

Q47. Johnny planted some trees along a straight road. Each tree was planted 8 cm apart. If the distance between the first tree and last tree was 80 cm, find the number of trees he planted.

- (a) 16                      (b) 10                      (c) 12                      (d) 11

Q48. Find the value of A and B respectively.

6	A	1	4
- 3	7	4	B
2	9	6	6

- (a) 9,7                      (b) 7,8                      (c) 8,5                      (d) 2,3





**Q49. Which one of the following numbers is a composite number?**



- (a) 1 (b) 3 (c) 2 (d) 4

**Q50. Find the predecessor of the number which will replace the question mark in the following equation.**

$$411 + 9 \times 3 = ?$$

- (a) 348 (b) 483 (c) 438 (d) 437

**Q51. The value of  is 4 times as much as the value of **

**What is the value of , if  - 37 is equal to 55?**

- (a) 638 (b) 368 (c) 836 (d) 336

**Q52. If  $\square + \bigcirc = 9$  and  $\square + \triangle + \bigcirc = 17$ , then the value of  $\triangle$  will be:**

- (a) 6 (b) 5 (c) 7 (d) 8

**Q53. What should be added to 19 to get the predecessor of 91?**

- (a) 71 (b) 72 (c) 81 (d) 88

**Q54. Which one of the following numbers has more tens?**

- (a) 897 (b) 879 (c) 809 (d) 789

**Q55. What is the missing number in the given box?**



- (a) 81 (b) 63 (c) 72 (d) 54

**Q56. Which of the following is not a group of prime numbers?**

- (a) 3, 7, 11 (b) 3, 5, 19 (c) 2, 3, 17 (d) 5, 9, 13

**Q57. A pictograph is a way of showing data using\_\_\_\_\_.**

- (a) bars (b) pictures (c) lines (d) angles

**Q58. Predecessor of the smallest 4-digit number is:**

- (a) the smallest 3-digit number.  
(b) the largest 3-digit number.  
(c) the smallest 4-digit number.  
(d) the largest 4-digit number.

**Q59. A cake is divided into five equal parts. Rahul ate  $\frac{2}{5}$  part of the cake and Amit ate  $\frac{1}{5}$  part of the cake. How much of the cake was left?**

- (a)  $\frac{1}{5}$  (b)  $\frac{2}{5}$  (c)  $\frac{3}{5}$  (d)  $\frac{4}{5}$

**Q60. If a cat catches 3 rats in the morning and 5 rats in the evening every day, then how many rats does the cat catch in a week?**

- (a) 48 (b) 49 (c) 64 (d) 56

# THANK YOU FOR BELIEVING IN US!

## X CLASS TOPPER

VINAYAK

99.2% IN CLASS X  
CBSE BOARD EXAMINATION 2022

## XII CLASS TOPPER



SANYAM BANSAL

99.8% IN CLASS XII  
CBSE BOARD EXAMINATION 2022

## SANYAM BANSAL

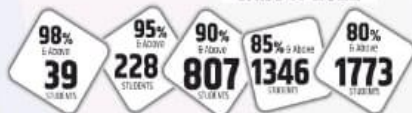
RANK  
1<sup>ST</sup>

1<sup>ST</sup> RANK, INTERNATIONAL COMMERCE  
OLYMPIAD, CTF, DELHI

1<sup>ST</sup> RANK- ICAL, COMMERCE WIZARD  
(REWARDED WITH RS. 1 LAC BY THE GOVT. OF INDIA)

1<sup>ST</sup> RANK (STATE)-STSE, RAJASTHAN

### Class X-2022



TOTAL  
MERITS  
2151

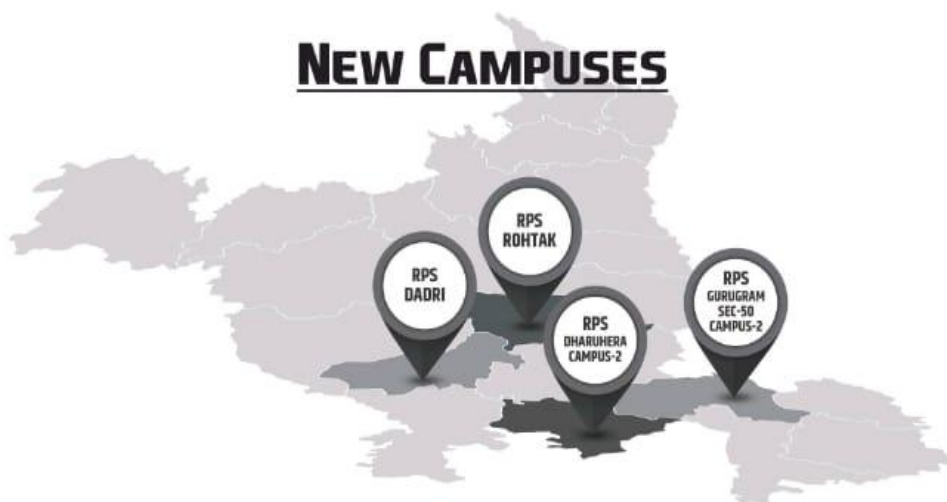
### Class XII-2022



TOTAL  
MERITS  
1887

## WE ARE SPREADING OUR WINGS

### NEW CAMPUSES



#### New Campuses

Dharuhera Campus -2 Ph.: 9467064534 | Rohtak Ph.: 7419998800 | Dadri Ph.: 8222048283, 84 | Gurugram Sec-50 Campus 2: 8409989898

Mahendergarh Ph.:01285-222645, 9416150201 | Rewari Ph.:8222000359 | Rewari City Ph.:9053555526 | Dharuhera Ph.:9467064534 | Kosli Ph.:9255148141 | Behror Ph.:9529678004 | Narnaul Ph.:01282-248014, 8198976666 | Hansi Ph.:9813196969, 9896100407 | Gurugram Sec- 50 Ph.:8409989898, 7827466258 | Gurugram Sec- 89 Ph.:8222999182 | Hisar Ph.:8307760465 | Karnal Ph.:8398000304/06

Top-Notch **Hostel Accommodation** for **Boys and Girls** in M/GARH, BEHROR, KOSLI & HANSI CAMPUSES