

# पूर्व उच्च प्राथमिक शिष्यवृत्ती परीक्षा (इयत्ता 5 वी), मे 2021

बैठक क्र.

संच

A

0 1 0 2

पेपर क्र. - II

माध्यम : मराठी

वेळ : 1:30 ते 3:00

पृष्ठ : 32

तृतीय भाषा व बुद्धिमत्ता चाचणी

एकूण गुण : 150

प्रश्नपत्रिका सोडविण्यापूर्वी कृपया खालील सूचना काळजीपूर्वक वाचा :

- (1) या प्रश्नपत्रिकेत दोन विभाग आहेत. त्यापैकी विभाग I मध्ये तृतीय भाषा विषयासाठी 1 ते 25 व विभाग II मध्ये बुद्धिमत्ता चाचणी विषयासाठी 26 ते 75 असे एकूण 75 प्रश्न आहेत. सर्व प्रश्न सोडविणे आवश्यक आहे.
- (2) प्रत्येक प्रश्नासाठी 2 गुण आहेत.
- (3) प्रश्नपत्रिका सोडविण्यासाठी एकूण 90 मिनिटांचा कालावधी दिला जाईल.
- (4) उत्तरे नोंदविण्यासाठी स्वतंत्र उत्तरपत्रिका दिलेली आहे. प्रत्येक प्रश्नक्रमांकासमोर चार पर्यायासाठी क्रमागत वर्तुळे दिलेली आहेत. त्यातील अचूक उत्तराचा पर्याय क्रमांक असलेले वर्तुळ पुढील उदाहरणात दाखविल्याप्रमाणे रंगवा. उदा. प्रश्न क्र. 6 च्या बरोबर उत्तराचा पर्याय क्र. 2 असेल, तर तो पुढीलप्रमाणे नोंदवावा.  
प्रश्न क्र. 6  ①  ②  ③  ④
- (5) खालीलप्रमाणे नोंदविलेली उत्तरे ग्राह्य धरण्यात येणार नाहीत. असे उत्तर नोंदविल्यास त्या प्रश्नास 'शून्य' गुण दिले जातील.  
 ①  ②  ③  ④
- (6) प्रत्येक प्रश्नासाठी एकापेक्षा अधिक वर्तुळात नोंदविलेली उत्तरे, खाडाखोड करून नोंदविलेली उत्तरे ग्राह्य धरण्यात येणार नाहीत.
- (7) एकदा नोंदविलेली उत्तरे पुन्हा बदलता येणार नाहीत.
- (8) पर्यायाची उत्तरे नोंदविताना फक्त काळ्या किंवा निळ्या रंगाच्या बॉलपेनचाच वापर करावा. पेन्सिलने नोंदविलेली उत्तरे ग्राह्य धरण्यात येणार नाहीत.
- (9) प्रश्नपत्रिकेत प्रत्येक पानावर खाली व शेवटच्या पानावर कच्चे काम करण्यासाठी मोकळी जागा आहे, तेथेच कच्चे काम करावे.
- (10) परीक्षेस मर्यादित वेळ असल्याने एखाद्या प्रश्नाचे उत्तर तुम्हाला येत नसल्यास पुढील प्रश्न सोडवा. शेवटी वेळ शिल्लक राहिल्यास उरलेल्या प्रश्नांसाठी पुन्हा प्रयत्न करावा.
- (11) एखाद्या प्रश्नात त्रुटी/चूक आढळल्यास त्याबाबत पर्यवेक्षक किंवा परीक्षा केंद्रसंचालक यांच्याकडे विचारणा करू नये.
- (12) प्रश्नातील त्रुटी/चूक/आक्षेपाबाबतचे निवेदन शाळेत किंवा पालकांनी गटशिक्षणाधिकारी किंवा शिक्षणाधिकारी यांच्याकडे लेखी स्वरूपात न पाठवता संबंधित शाळेच्या लॉगिन मधून ऑनलाईन पद्धतीनेच पाठवावे.
- (13) त्रुटी/चूक/आक्षेपाबाबतचे निवेदन ऑनलाईन पद्धतीने पाठविण्याची मुदत परीक्षा परिषदेच्या संकेतस्थळावर अंतरिम (तात्पुरती) उत्तरसूची प्रसिद्ध झाल्यापासून 10 (दहा) दिवसांपर्यंत राहिल.
- (14) मुद्रणदोष किंवा अन्य कारणांमुळे प्रश्न चुकीचा असल्याचे आढळल्यास तज्ञ समितीच्या अभिप्रायानुसार योग्य ती कार्यवाही केली जाईल.
- (15) मूळ माध्यमासोबत इंग्रजी भाषेतील प्रश्नपत्रिका दिलेली आहे. मूळ माध्यमातील संदिग्ध प्रश्नांबाबत इंग्रजी प्रश्न पहावेत.

**Section - I**

**Instructions for Q. 01 to Q. 03**

**Read the passage carefully and choose the correct options:**

A red traffic light is a warning that means STOP. It is not safe to cross the road until the green signal lights up. Start walking when green signal is on.

In short, a red light is a warning to pay attention.

**01.** If Red : Stop then Green : ?

- |          |          |
|----------|----------|
| (1) Pay  | (2) Safe |
| (3) Walk | (4) Warn |

**02.** Find out the rhyming word from the passage for night.

- |            |           |
|------------|-----------|
| (1) eight  | (2) right |
| (3) slight | (4) light |

**03.** Select the correct adjective from the given passage.

- (A) Red                      (B) Green
- |                         |                           |
|-------------------------|---------------------------|
| (1) 'A' and 'B' correct | (2) 'B' correct           |
| (3) 'A' correct         | (4) 'A' and 'B' incorrect |

**04.** Select the set which has different sound

- |                                    |
|------------------------------------|
| (1) Camera, Castle, Cabbage, Cat   |
| (2) Hat, Handle, Hammer, Hand      |
| (3) Kitten, Kettle, Knife, Kingdom |
| (4) Mat, Map, Man, Mango           |

**SPACE FOR ROUGH WORK**

05. Look at the greeting card. Read the message and choose the correct option.

**Dear Teacher,**  
We all love you and  
respect you very much.  
**Thank you**

- (1) Happy Independence Day (2) Happy Teacher's Day  
(3) Happy Mother's Day (4) Happy Diwali

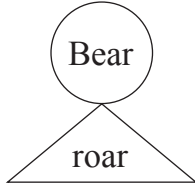
06. Choose the mismatch pair from the given options.

- (1) deer - deer (2) student - students  
(3) mouse - mice (4) ox - oxes

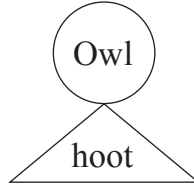
07. Select the correct option for the given word Lift :

- (1) the wall (2) the farm  
(3) the river (4) the box

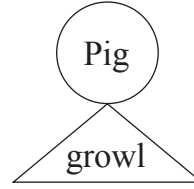
08. Choose the correct pair from the given options.



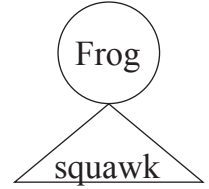
(1)



(2)



(3)



(4)

09. Choose the correct ordinal number which comes after Eleven.

- (1) Tewflth (2) Twvlfth  
(3) Twelfth (4) Tweflth

कच्च्या कामासाठी फक्त

10. Look at the picture and select the correct conversation which matches with the picture:



- (1) A : Please give us two full glasses of sugarcane juice.  
B : But Mamma, I want some ice in my juice.
- (2) A : Give me some tomatoes  
B : Where's your bag ?
- (3) A : Do you like roasted two corn-cobs?  
B : Oh, I love them
- (4) A : Have you tried these cakes?  
B : This is a new cake shop

11. Choose the correct opposite words for 'a' and 'b'.

a	deep	×	?
b	ugly	×	?

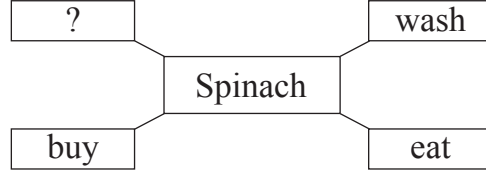
- (1) Top, Cute (2) Bottom, Sweet  
(3) Shallow, Beautiful (4) Fountain, Cruel

12. Choose the correct option of the following statement which indicates the correct time 'Rita wakes up early in the morning'

- (1) 7 p.m. (2) 7 a.m.  
(3) 3 p.m. (4) 12 noon

SPACE FOR ROUGH WORK

13. Complete the box by choosing the correct action word for the given word.



- (1) lump (2) scribble  
(3) wobble (4) cook

14. The sign  indicates

- (1) stop (2) turn right  
(3) go straight (4) turn left

15. Rearrange the numbers and make meaningful words.

v a f t i u r o e  
1 2 3 4 5 6 7 8 9

- (1) 3 2 1 8 6 7 5 4 9 (2) 3 1 2 8 7 6 5 4 9  
(3) 3 2 7 1 8 6 5 9 4 (4) 3 2 1 7 6 8 5 4 9

16. Solve the riddle

'I use a spanner and  
a screw - driver.

Who am I?'

- (1) mechanic (2) potter  
(3) milkman (4) farmer

17. Choose the correct option for the given word : Shape

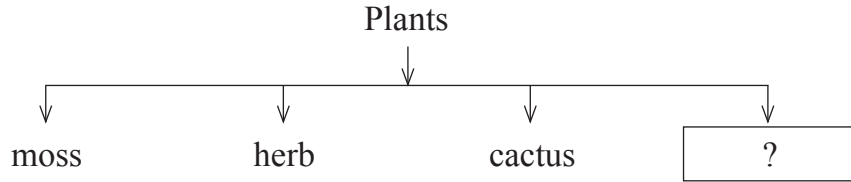
- (1) high (2) low  
(3) fast (4) circle

कच्च्या कामासाठी फक्त


18. Choose the correct 'Motto' from the given options
- (1) We'll all be quiet together                      (2) Give me a story book  
(3) Protect all plants                                      (4) Form groups of ten

19. Fill in the blank with the correct option.  
He has bought ..... electric iron.
- (1) the    (2) an  
(3) no article    (4) a

20. Look at the diagram and choose the correct option.



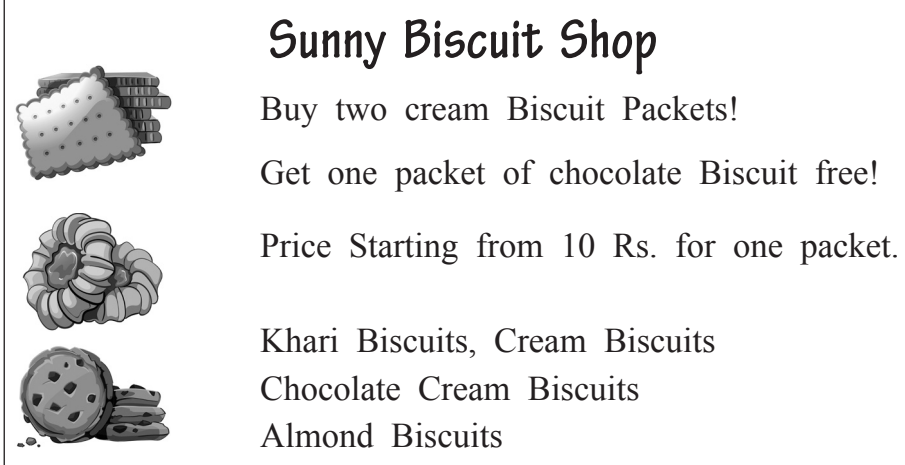
- (1) stem    (2) thorn  
(3) vine    (4) grain
21. Look at the picture and select the correct expression



- (1) scared    (2) proud  
(3) shy    (4) sleepy

SPACE FOR ROUGH WORK

22. Look at the advertisement and choose the correct option



**Sunny Biscuit Shop**

Buy two cream Biscuit Packets!  
Get one packet of chocolate Biscuit free!  
Price Starting from 10 Rs. for one packet.

Khari Biscuits, Cream Biscuits  
Chocolate Cream Biscuits  
Almond Biscuits

You can buy ..... packets of cream biscuits and get ..... packet of chocolate biscuits.

- (1) 1, 1 (2) 1, 2  
(3) 2, 1 (4) 2, 0

23. How many capital letters should be in the given sentence.

i am sopan bhosale

- (1) 2 (2) 3  
(3) 4 (4) 1

24. Choose the correct option of punctuation mark for underlined sentence.

A : What's your name

B : Tell me your name, please

C : Chandrashekhar, You can call me Chandu

- (1) ? (2) .  
(3) ; (4) !

25. Choose the sentence which has correct punctuation marks.

- (1) Oh no! what shall I do now? (2) Oh, no? what shall I do now?  
(3) Oh, no! What shall I do now. (4) Oh, no! what shall I do now?

कच्च्या कामासाठी फक्त

**SECTION - II**

**INTELLIGENCE TEST**

26. In the word 'EXTRAORDINARY', which is the letter at the 4th place to the right of the letter 'O'?

- |       |       |
|-------|-------|
| (1) X | (2) A |
| (3) T | (4) N |

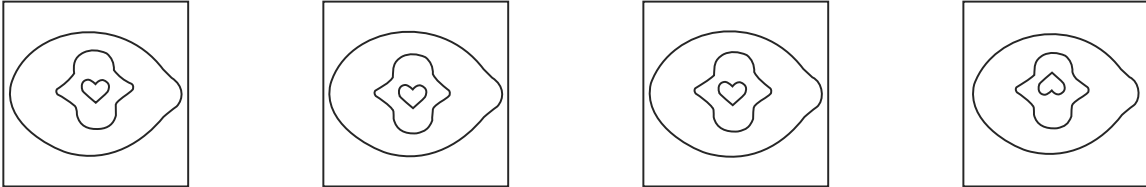
**Q. 27 to Q. 31 Direction :** Find the odd term.

- |              |            |
|--------------|------------|
| 27. (1) Moon | (2) Mars   |
| (3) Jupiter  | (4) Saturn |

- |           |         |
|-----------|---------|
| 28. (1) 9 | (2) 65  |
| (3) 26    | (4) 126 |

- |             |         |
|-------------|---------|
| 29. (1) 386 | (2) 264 |
| (3) 275     | (4) 495 |

- |                   |                |
|-------------------|----------------|
| 30. (1) Millenium | (2) Second     |
| (3) Century       | (4) Light year |

31. 
- |     |     |     |     |
|-----|-----|-----|-----|
| (1) | (2) | (3) | (4) |
|-----|-----|-----|-----|

SPACE FOR ROUGH WORK



## विभाग - II

## बुद्धिमत्ता चाचणी


26. 'पतितपावन' या शब्दातील 'त' या अक्षराच्या उजवीकडील दुसरे अक्षर कोणते येईल?
- (1) प (2) ति  
(3) न (4) व

प्रश्न 27 ते 31 साठी सूचना:

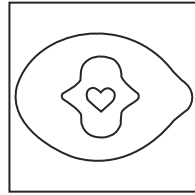
गटात न बसणारे पद ओळखा.

27. (1) चंद्र (2) मंगळ  
(3) गुरु (4) शनि
28. (1) 9 (2) 65  
(3) 26 (4) 126
29. (1) 386 (2) 264  
(3) 275 (4) 495
30. (1) सहस्रक (2) सेकंद  
(3) शतक (4) काष्ठवलय

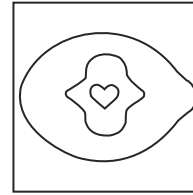
31.



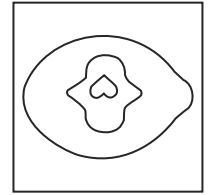
(1)



(2)



(3)



(4)

कच्च्या कामासाठी फक्त



A	B	C	D	E	F	G	H	I	J	K	L	M	N	O	P	Q	R	S	T	U	V	W	X	Y
---	---	---	---	---	---	---	---	---	---	---	---	---	---	---	---	---	---	---	---	---	---	---	---	---

32. In the letter series “V, M, E, T, R, L, M, E, S, O, L, M, E, T, S, Q, V, M, E, O, L”, how many times M is preceded by E and is immediately followed by T?

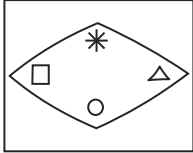
- (1) 3
- (2) 2
- (3) 4
- (4) 1

33. Find the correct alternative to replace the question mark in the series given below.

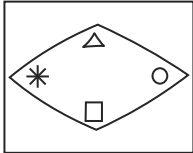
4, 7, 13, 25, 49, ?

- (1) 59
- (2) 95
- (3) 97
- (4) 69

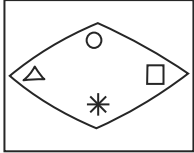
34. In the given figures there is a particular sequence. Identify the sequence and find the figure which will replace the question mark.



(1)

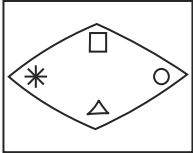


(2)



(3)

?



(4)

35. **6, 8, 7, 3, 5, 9, 4, 2, 1**

In the number series by how much is the sum of prime numbers is more or less than the sum of composite numbers?

- (1) More by 10
- (2) Less by 10
- (3) Less by 9
- (4) More by 9

SPACE FOR ROUGH WORK

32. 'श्रीमंत, मृणमूर्ती, कर्ताधर्ता, ऋतू, गृह, समर्पण, प्रवास' या शब्दसमुहात जोडाक्षर असलेली एकूण किती अक्षरे आहेत?

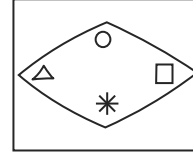
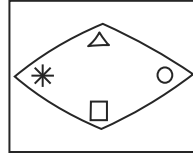
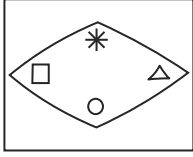
- (1) 7 (2) 6  
(3) 9 (4) 5

33. खालील संख्यामालिकेत प्रश्नचिन्हाच्या जागी येणारा पर्याय निवडा.

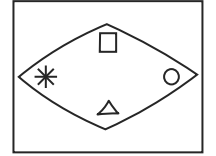
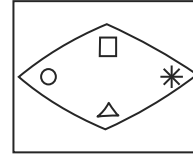
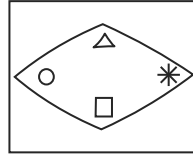
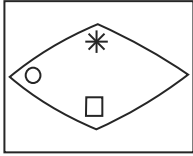
4, 7, 13, 25, 49, ?

- (1) 59 (2) 95  
(3) 97 (4) 69

34. पुढील आकृत्यांमध्ये विशिष्ट प्रकारचा क्रम आहे. तो क्रम ओळखून प्रश्नचिन्हाच्या जागी कोणती आकृती येईल ते शोधा.



?



(1)

(2)

(3)

(4)

35.

**6, 8, 7, 3, 5, 9, 4, 2, 1**

वरील संख्यामालिकेतील मूळसंख्यांची एकूण बेरीज संयुक्त संख्यांच्या एकूण बेरजेपेक्षा कितीने कमी अथवा जास्त आहे?

- (1) 10 ने जास्त (2) 10 ने कमी  
(3) 9 ने कमी (4) 9 ने जास्त

कच्च्या कामासाठी फक्त

**Q. 36 and Q. 37 : Direction :**

Find out the mirror image of each of the following question figure from the alternatives given.

**36. Question Figure**



**Answer Figure**



(1)



(2)




(3)

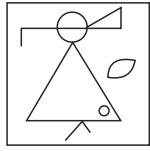


(4)

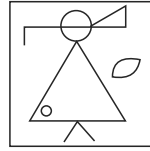
**37. Question Figure**



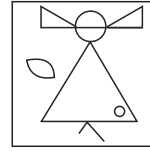
**Answer Figure**



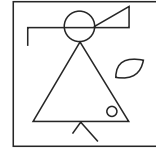
(1)



(2)



(3)



(4)

**38.** In the given alphabetical series, which group of letters will occur at the place of question mark?

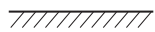
? MN ? NMM ? MNM ? N ? N

- (1) MMNMM      (2) MNMNM      (3) MMNMMN      (4) MNMMM

**Q. 39 and Q. 40 : Direction :**

In each question a problem figure is held vertical above water surface. Identify its water reflection and select the correct alternative.

**39. Question Figure**



**Answer Figure**




(1)



(2)



(3)



(4)

SPACE FOR ROUGH WORK

प्रश्न 36 व 37 साठी सूचना :

पुढील प्रश्नामधील प्रश्नाकृतीची आरशातील प्रतिमा कशी दिसेल ते पर्यायी उत्तर आकृतींमधून निश्चित करा.

36. प्रश्नाकृती



(1)



(2)



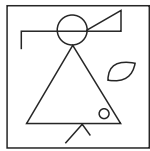
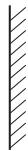

(3)




(4)

उत्तर आकृती

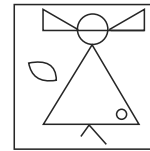
37. प्रश्नाकृती




(1)



(2)



(3)



(4)

उत्तर आकृती

38. पुढे दिलेल्या चिन्हांच्या मालिकेत प्रश्नचिन्हांच्या जागी चिन्हांचा कोणता समूह येईल?

? MN ? NMM ? MNM ? N ? N

(1) MMNMM

(2) MNMNM

(3) MMNMN

(4) MNMMM

प्रश्न 39 व 40 साठी सूचना:

पुढे दिलेली प्रश्नाकृती पाण्यावर उभी धरल्यास तिचे पाण्यात प्रतिबिंब कसे दिसेल ते उत्तर आकृत्यांमधून शोधा.

39. प्रश्नाकृती



(1)



(2)



(3)



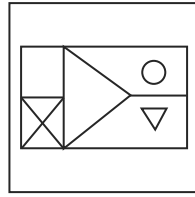
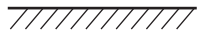
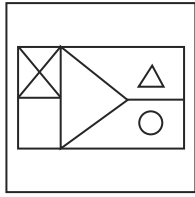
(4)

उत्तर आकृती

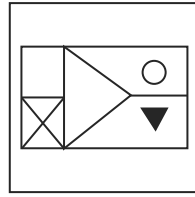
कच्च्या कामासाठी फक्त

40. **Question Figure**

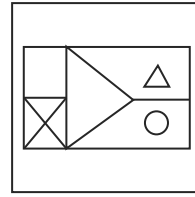
**Answer Figure**



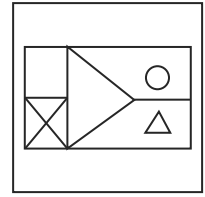
(1)



(2)



(3)



(4)

41. Find the correct alternative to replace the question mark in the given number series.

13, 15, 19, 27, ?

(1) 35

(2) 27

(3) 32

(4) 30

42.

**ABCDE FGHIJ KLMNO PQRST UVWXY**

In the given alphabetical series, write the left adjacent letter, of the letter which is at seventh place from the right end?

(1) E

(2) T

(3) R

(4) Y

**Q. 43 to Q. 47 : Direction :**

In the following questions, first pair has same relationship between first two terms. The same relation holds true for the second pair. Identify the relation and select the correct alternative.

43. Bhakri : Jowar :: Butter : ?

(1) Sugarcane

(2) Raw Mango

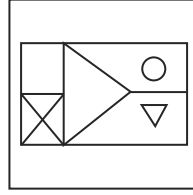
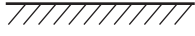
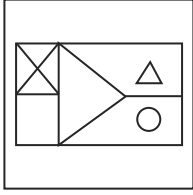
(3) Milk

(4) Bajra

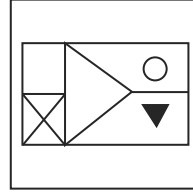
**SPACE FOR ROUGH WORK**

40. प्रश्नाकृती

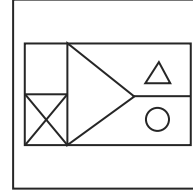
उत्तर आकृती



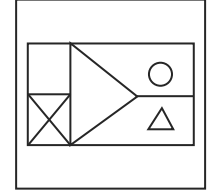
(1)



(2)



(3)



(4)

41. पुढील संख्यामालिकेत प्रश्नचिन्हाच्या जागी येणारा पर्याय निवडा.

13, 15, 19, 27, ?

(1) 35

(2) 27

(3) 32

(4) 30

42.

**ABCDE FGHIJ KLMNO PQRST UVWXY**

वरील अक्षरमालेतील उजवीकडील सातव्या अक्षराच्या डावीकडील लगतचे अक्षर कोणते येईल?

(1) E

(2) T

(3) R

(4) Y

प्रश्न 43 ते प्रश्न 47 साठी सूचना:

पुढील प्रश्नात पहिल्या व दुसऱ्या पदाचा जसा संबंध आहे अगदी तसाच संबंध तिसऱ्या व चौथ्या पदात आहे. तो संबंध शोधा व प्रश्नचिन्हाच्या जागी योग्य पर्याय निवडा.

43. भाकरी : ज्वारी :: लोणी : ?

(1) ऊस

(2) कैरी

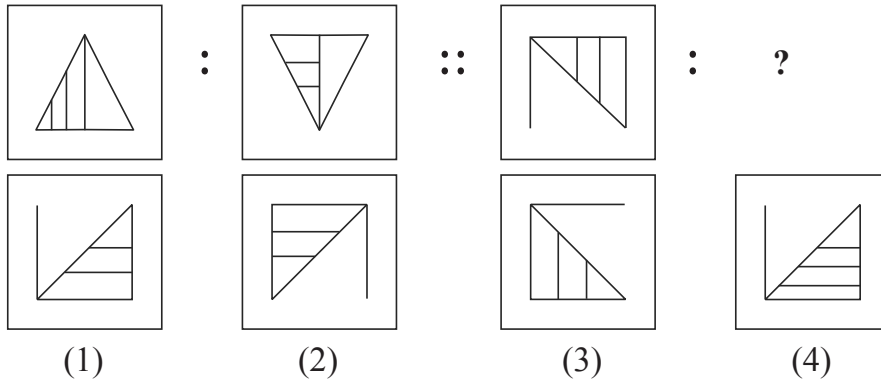
(3) दूध

(4) बाजरी

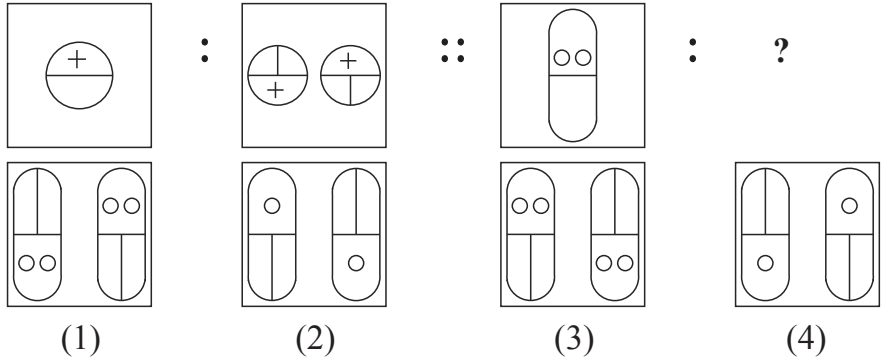
कच्च्या कामासाठी फक्त

A	B	C	D	E	F	G	H	I	J	K	L	M	N	O	P	Q	R	S	T	U	V	W	X	Y
---	---	---	---	---	---	---	---	---	---	---	---	---	---	---	---	---	---	---	---	---	---	---	---	---

44.



45.



46.

4 : 18 :: 6 :: ?

- (1) 19                                      (2) 22                                      (3) 18                                      (4) 27

47.

26 : 38 :: 48 : ?

- (1) 52                                      (2) 80                                      (3) 48                                      (4) 64

48.

Find the odd term in the given series.

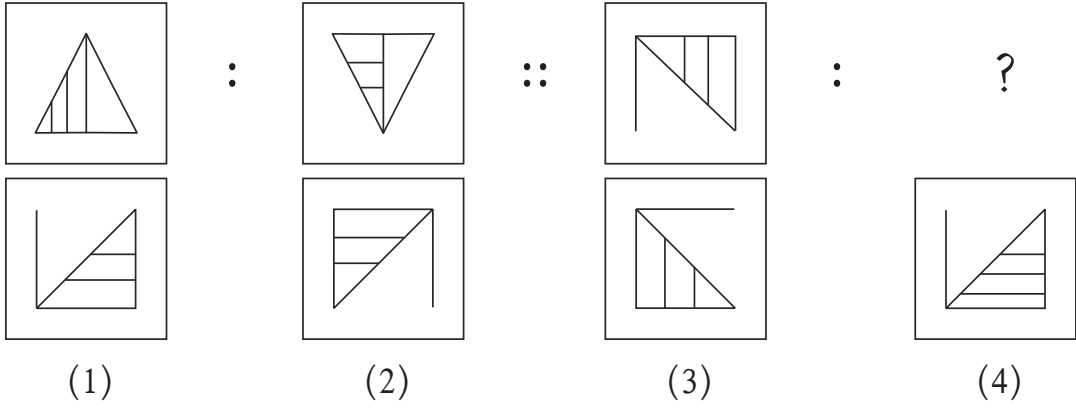
3, 4, 6, 10, 22, 34

- (1) 6                                      (2) 10                                      (3) 22                                      (4) 34

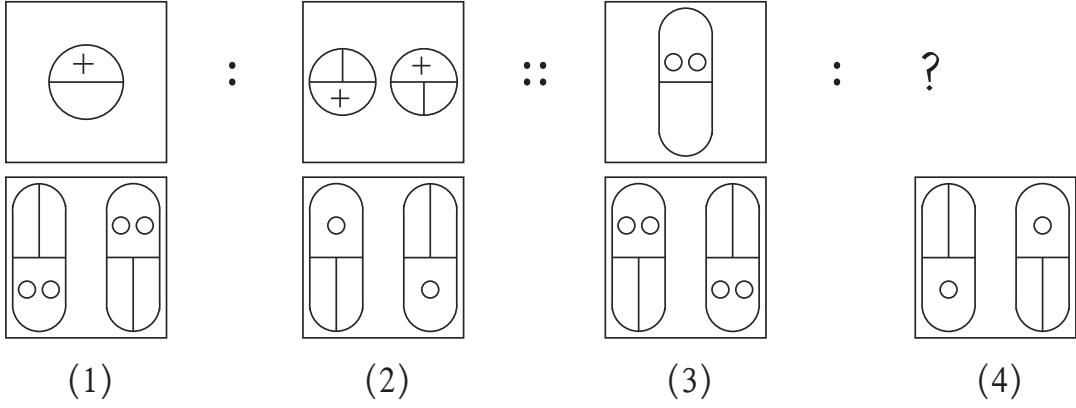
**SPACE FOR ROUGH WORK**



44.



45.



46.

4 : 18 :: 6 : ?  
 (1) 19 (2) 22 (3) 18 (4) 27

47.

26 : 38 :: 48 : ?  
 (1) 52 (2) 80 (3) 48 (4) 64

48.

पुढील संख्यामालिकेतील चुकीचे पद ओळखा.  
 3, 4, 6, 10, 22, 34  
 (1) 6 (2) 10 (3) 22 (4) 34

कच्च्या कामासाठी फक्त

A	B	C	D	E	F	G	H	I	J	K	L	M	N	O	P	Q	R	S	T	U	V	W	X	Y
---	---	---	---	---	---	---	---	---	---	---	---	---	---	---	---	---	---	---	---	---	---	---	---	---

49. Swati is eight years older than Kranti. The sum of the present ages of both the girls is 44. Find the age of Swati eight years before?


- (1) 52                                      (2) 36                                      (3) 34                                      (4) 18

50. If Rat is called Cat, Cat is called Donkey, Donkey is called Dog, Dog is called Deer, Deer is called Human, Human is called Rabbit, Rabbit is called Calf then who is the most intelligent animal among them?


- (1) Human                                      (2) Calf                                      (3) Rabbit                                      (4) Dog

**Q. 51 and Q. 52 : Direction :** Find out the figure which exactly matches with the question figure from the four alternative figures given below.


51. **Question Figure**




**Answer Figure**




(1)



(2)

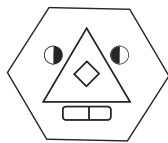


(3)

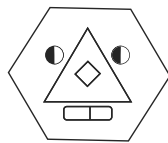


(4)

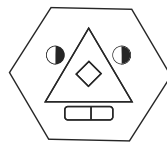
52. **Question Figure**



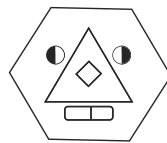
**Answer Figure**



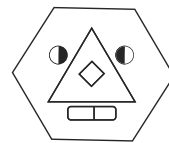
(1)



(2)



(3)



(4)

53. In a shop, there are few sacks of Wheat, Jowar, Bajra, Tur, Sugar. The number of sacks of Sugar's is twice the total of all other sacks. All other sacks of grains are equal i.e. each of 12. Find out the total number of sacks in the shop?

- (1) 60                                      (2) 144                                      (3) 96                                      (4) 180

**SPACE FOR ROUGH WORK**

A	B	C	D	E	F	G	H	I	J	K	L	M	N	O	P	Q	R	S	T	U	V	W	X	Y
---	---	---	---	---	---	---	---	---	---	---	---	---	---	---	---	---	---	---	---	---	---	---	---	---


49. स्वाती क्रांतीपेक्षा 8 वर्षांनी मोठी आहे. त्या दोघींच्या आजच्या वयांची बेरीज 44 वर्षे आहे. तर स्वातीचे आठ वर्षापूर्वीचे वय किती वर्षे असतील?
- (1) 52                      (2) 36                      (3) 34                      (4) 18

50. उंदराला मांजर म्हटले, मांजराला गाढव म्हटले, गाढवाला कुत्रा म्हटले, कुत्र्याला हरीण म्हटले, हरीणला माणूस म्हटले, माणसाला ससा म्हटले, सशाला बछडा म्हटले तर सर्वात बुद्धिमान प्राणी कोण असेल?
- (1) माणूस                      (2) बछडा                      (3) ससा                      (4) कुत्रा





प्रश्न 51 व 52 साठी सूचना:

खालील आकृतीस तंतोतंत जुळणारी आकृती पर्यायांतून निवडा.

51. प्रश्नाकृती



उत्तर आकृती



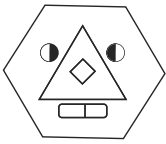
(1)

(2)

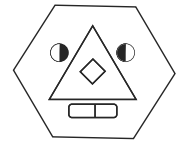

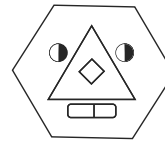
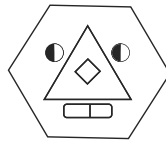
(3)

(4)

52. प्रश्नाकृती



उत्तर आकृती



(1)

(2)

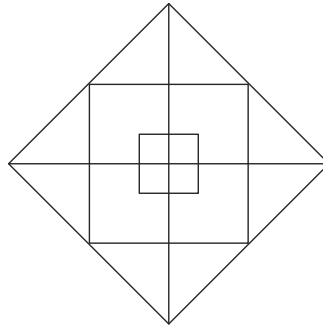
(3)

(4)

53. एका दुकानात गहू, ज्वारी, बाजरी, तूर, साखर यांची काही पोती आहेत. यात साखरेची पोती इतर सर्व धान्याच्या एकूण पोत्यांच्या संख्येपेक्षा दुपटीने जास्त आहेत. तसेच साखरेशिवाय इतर सर्व पोती समान म्हणजे प्रत्येकी 12 आहेत तर दुकानात धान्यांच्या पोत्यांची एकूण संख्या किती आहे?
- (1) 60                      (2) 144                      (3) 96                      (4) 180

कच्च्या कामासाठी फक्त

54. Find out the total numbers of squares present in the given figure.



- (1) 8                                      (2) 9                                      (3) 11                                      (4) 12

**Q. 55 to Q. 59 : Direction :**

In each of the following questions three words are given with some common relation. So their group is formed. Select a word from the alternatives given which has the same common feature of the given group.



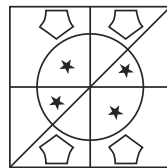

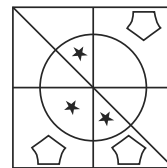
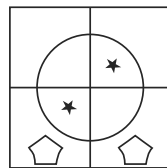
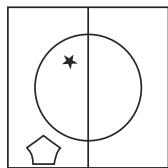
55. Sugar, Salt, Washing soda, \_\_\_\_\_

- (1) Alum powder      (2) Turmeric powder      (3) Oil                                      (4) Sand

56. Onion, Garlic, Potato, \_\_\_\_\_

- (1) Sweet potato      (2) Radish                                      (3) Beet root                                      (4) Ginger

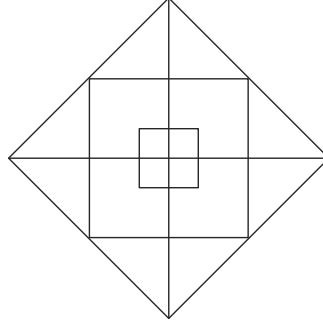
57.



- (1)                                      (2)                                      (3)                                      (4)

**SPACE FOR ROUGH WORK**

54. पुढील आकृतीतील एकूण चौरसांची संख्या किती येईल?



- (1) 8                      (2) 9                      (3) 11                      (4) 12

प्रश्न 55 ते प्रश्न 59 साठी सूचना:

प्रश्नाच्या सुरुवातीला तीन पदे दिली आहेत. त्यांचे काही वैशिष्ट्य आहे, त्यामुळे त्यांचा एक गट तयार होतो, या गटात बसणारे पद दिलेल्या पर्यायातून निश्चित करा.

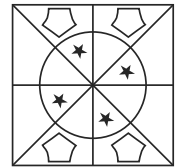

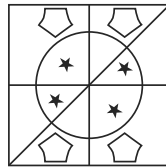
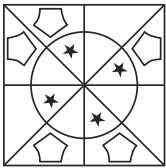
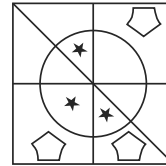
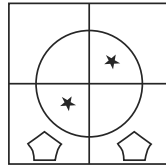
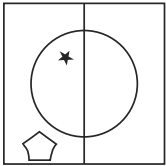
55. साखर, मीठ, धुण्याचा सोडा, \_\_\_\_\_

- (1) तुरटीची पूड              (2) हळदपूड              (3) तेल              (4) वाळू

56. कांदा, लसूण, बटाटे, \_\_\_\_\_

- (1) रताळे              (2) मुळा              (3) बीट              (4) आले

57.



(1)

(2)

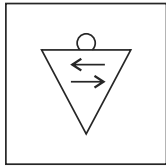
(3)

(4)

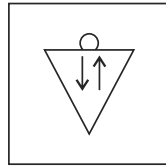
कच्च्या कामासाठी फक्त

A	B	C	D	E	F	G	H	I	J	K	L	M	N	O	P	Q	R	S	T	U	V	W	X	Y
---	---	---	---	---	---	---	---	---	---	---	---	---	---	---	---	---	---	---	---	---	---	---	---	---

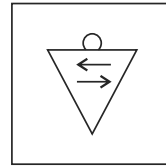
58.



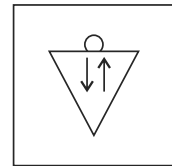

(1)



(2)



(3)



(4)

59. 3412, 4520, 2510, \_\_\_\_\_


(1) 1234

(2) 2020

(3) 5402

(4) 4416

60. Find out the number of triangles in the given figure.



(1) 14

(2) 11

(3) 10

(4) 13

61. John and Mois are standing in a row. John is at 17<sup>th</sup> place from the beginning and 8<sup>th</sup> from back. On the other hand Mois is 6<sup>th</sup> from the beginning then what will be his position from back?

(1) 24

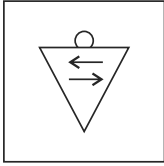
(2) 19

(3) 18

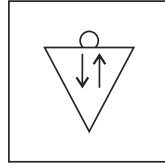
(4) 17

**SPACE FOR ROUGH WORK**

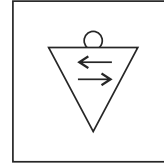
58.



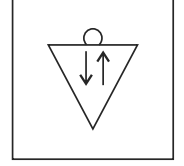

(1)



(2)



(3)



(4)

59. 3412, 4520, 2510, \_\_\_\_\_


(1) 1234

(2) 2020

(3) 5402

(4) 4416

60. खालील आकृतीत त्रिकोणांची एकूण संख्या किती आहे?



(1) 14

(2) 11

(3) 10

(4) 13

61. जॉन व मोईस एका रांगेत उभे असून जॉनचा पुढून क्रमांक 17 वा व मागून 8 वा क्रमांक आहे. तर मोईसचा त्याच रांगेत पुढून 6 वा क्रमांक असल्यास मोईसचा शेवटून कितवा क्रमांक असेल?

(1) 24

(2) 19

(3) 18

(4) 17

कच्च्या कामासाठी फक्त

A	B	C	D	E	F	G	H	I	J	K	L	M	N	O	P	Q	R	S	T	U	V	W	X	Y
---	---	---	---	---	---	---	---	---	---	---	---	---	---	---	---	---	---	---	---	---	---	---	---	---

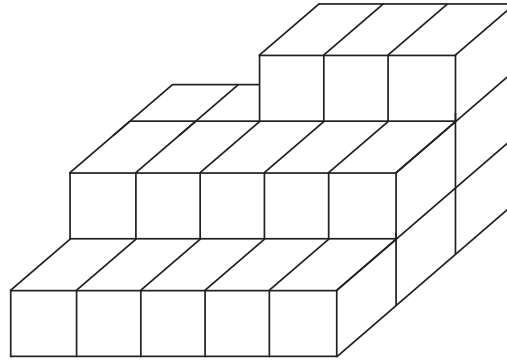
62. Rashid is standing facing North East. He turned to his left 3 times in right angles. Which of the following directions will be there to his right?  
 (1) South West            (2) North West            (3) North            (4) North East

**Q. 63 and Q. 64 : Direction :**

In the code language few numbers are denoted using symbols. Study them and find the correct alternative.

Numbers	0	1	2	3	4	5	6	7	8	9
Symbols	+	★	○	□	●	▽	×		@	Δ

63. Δ Subtract □ Multiply + Add ×  
 (1) 12                            (2) 15                            (3) 6                            (4) 9
64. ▽ Add || Subtract Δ Divide □  
 (1) 9                            (2) 8                            (3) 2                            (4) 6
65. In the given figure, how many cubical boxes are there?



- (1) 13                            (2) 28                            (3) 18                            (4) 23

**SPACE FOR ROUGH WORK**



A	B	C	D	E	F	G	H	I	J	K	L	M	N	O	P	Q	R	S	T	U	V	W	X	Y
---	---	---	---	---	---	---	---	---	---	---	---	---	---	---	---	---	---	---	---	---	---	---	---	---

62. रशीद ईशान्य दिशेकडे तोंड करून उभा आहे. तो काटकोनात डावीकडे तीन वेळा वळला तर आता त्याच्या उजव्या हाताकडील दिशा कोणती असेल?
- (1) नैर्ऋत्य (2) वायव्य (3) उत्तर (4) ईशान्य

प्रश्न 63 व प्रश्न 64 साठी सूचना:

एका सांकेतिक भाषेत अंकांसाठी काही चिन्हे दिलेली आहेत त्याचा विचार करून योग्य उत्तर निवडा.

अंक	0	1	2	3	4	5	6	7	8	9
चिन्ह	+	★	○	□	●	▽	×		@	△

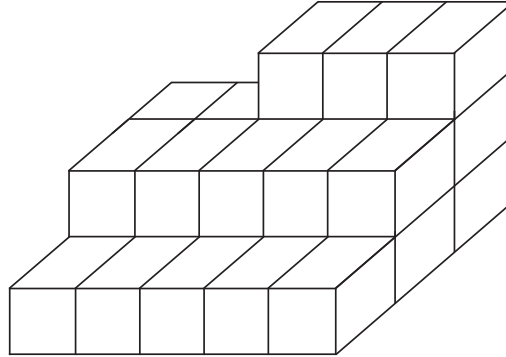
63. △ वजा □ गुणिले + अधिक ×

- (1) 12 (2) 15 (3) 6 (4) 9

64. ▽ अधिक || वजा △ भागिले □

- (1) 9 (2) 8 (3) 2 (4) 6

65. पुढील दिलेल्या आकृतीत एकूण किती घनाकृती ठोकळे आहेत?



- (1) 13 (2) 28 (3) 18 (4) 23

कच्च्या कामासाठी फक्त

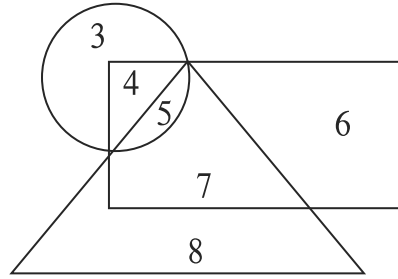
A	B	C	D	E	F	G	H	I	J	K	L	M	N	O	P	Q	R	S	T	U	V	W	X	Y
---	---	---	---	---	---	---	---	---	---	---	---	---	---	---	---	---	---	---	---	---	---	---	---	---

66. In the year 2017. Republic day was on Wednesday then in the same year Dr. Babasaheb Ambedkar Jayanti was on which day?

- (1) Saturday                      (2) Sunday                      (3) Thursday                      (4) Friday

67. Observe the venn diagram carefully and choose the correct answer from the alternatives for the questions given below.

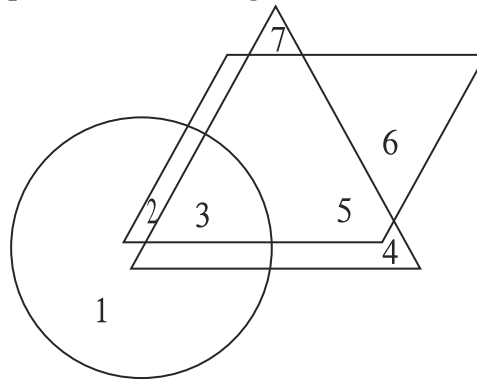
What will be the difference between the sum of numbers that are only in rectangle and triangle to that of the numbers only in circle and rectangle?



- (1) 23                                      (2) 5                                      (3) 6                                      (4) 2

68. The given figure shows the number of musicians in triangle, singers in rectangle and actors in circle. Observe the figure and answer the questions.

Find the number of people who are singers as well as musicians and actors?



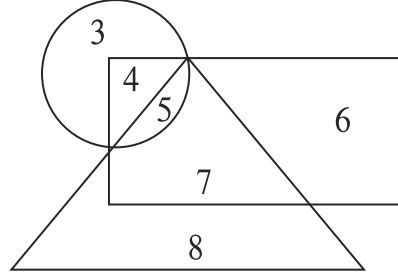
- (1) 3                                      (2) 4                                      (3) 5                                      (4) 2

SPACE FOR ROUGH WORK

66. इ. स. 2017 रोजी प्रजासत्ताक दिन बुधवारी आला होता तर त्यावर्षी डॉ. बाबासाहेब आंबेडकर जयंती कोणत्या वारी आली असेल?

- (1) शनिवार (2) रविवार (3) गुरुवार (4) शुक्रवार

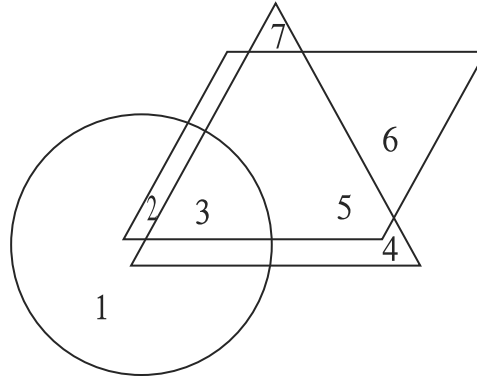
67. पुढील वेन आकृती काळजीपूर्वक पहा व खालील प्रश्नाचे उत्तर पर्यायातून निवडा.  
प्रश्न: फक्त चौकोन व त्रिकोणात असणारे अंक आणि फक्त वर्तुळ व चौकोनात असणारे अंक यांच्या बेरजेतील फरक किती येईल?



- (1) 23 (2) 5 (3) 6 (4) 2

68. पुढील वेन आकृतीत त्रिकोणात संगीतकार, चौकोनात गायक, वर्तूळात नटांची संख्या दर्शविते त्याचे निरीक्षण करून पुढील प्रश्नाचे उत्तर सांगा.

प्रश्न - संगीतकार, गायक व नट हे तीनही गुण असणाऱ्यांची एकूण संख्या किती आहे?



- (1) 3 (2) 4 (3) 5 (4) 2

कच्च्या कामासाठी फक्त

A	B	C	D	E	F	G	H	I	J	K	L	M	N	O	P	Q	R	S	T	U	V	W	X	Y
---	---	---	---	---	---	---	---	---	---	---	---	---	---	---	---	---	---	---	---	---	---	---	---	---

69. 1<sup>st</sup> February 2016 was Monday. What was the day on 1<sup>st</sup> February 2010?

- (1) Monday                      (2) Tuesday                      (3) Thursday                      (4) Friday

70. Select the number to replace the question mark.

4	14	49
9	18	36
16	?	25

- (1) 18                      (2) 15                      (3) 30                      (4) 20

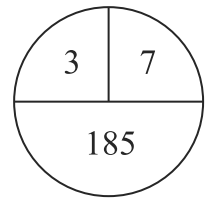
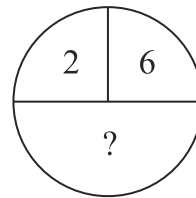
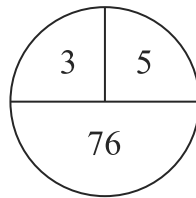
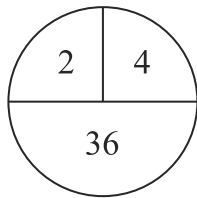
71. In a code language CAP = 341, PAN = 417, RAN = 197 is written like this. In the same language how will be the word CAR written?

- (1) 917                      (2) 391                      (3) 471                      (4) 734

72. In a code language 246 is written as 82448. How will 579 be written in the same code language?

- (1) 305690                      (2) 356399                      (3) 355699                      (4) 356345

73. Select the correct alternative to replace question mark.



- (1) 64                      (2) 152                      (3) 224                      (4) 112

**SPACE FOR ROUGH WORK**

A	B	C	D	E	F	G	H	I	J	K	L	M	N	O	P	Q	R	S	T	U	V	W	X	Y
---	---	---	---	---	---	---	---	---	---	---	---	---	---	---	---	---	---	---	---	---	---	---	---	---

69. 1 फेब्रुवारी 2016 रोजी सोमवार होता, तर 1 फेब्रुवारी 2010 रोजी कोणता वार होता?  
 (1) सोमवार (2) मंगळवार (3) गुरुवार (4) शुक्रवार

70. प्रश्न चिन्हाच्या जागी येणाऱ्या संख्येचा पर्याय निवडा.

4	14	49
9	18	36
16	?	25

- (1) 18 (2) 15 (3) 30 (4) 20

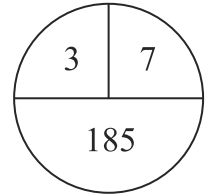
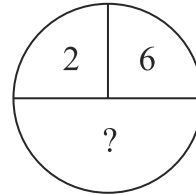
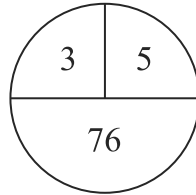
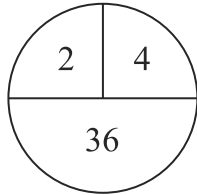
71. एका सांकेतिक भाषेत मदन = 417, सदन = 197, वमन = 341 असे लिहितात तर त्याच भाषेत 'वसन' हा शब्द कसा लिहिला जाईल?

- (1) 917 (2) 391 (3) 471 (4) 734

72. एका सांकेतिक भाषेत 246 ही संख्या 82448 अशी लिहितात तर त्याच भाषेत 579 ही संख्या कशी लिहिली जाईल?

- (1) 305690 (2) 356399 (3) 355699 (4) 356345

73. पुढील दिलेल्या आकृतीत प्रश्नचिन्हाच्या जागी येणाऱ्या संख्येचा पर्याय शोधा व निवडा.



- (1) 64 (2) 152 (3) 224 (4) 112

कच्च्या कामासाठी फक्त

A	B	C	D	E	F	G	H	I	J	K	L	M	N	O	P	Q	R	S	T	U	V	W	X	Y
---	---	---	---	---	---	---	---	---	---	---	---	---	---	---	---	---	---	---	---	---	---	---	---	---

74. Grampanchayat has appealed the local people to contribute in the 'Jalyukta Shivaar' scheme. In this situation which action will be appropriate for Atharva?
- (1) Atharva will plan for an outing with family.
  - (2) Atharva will understand the importance of the scheme and will happily contribute.
  - (3) Atharva will tell people about the drawbacks of the scheme.
  - (4) Atharva will give excuse for an important work and will stay at home.
75. While going to school you see a magic show going on. Your friend Subhash insists you to see that. What will you do?
- (1) Leaving Subhash there, you will go to school.
  - (2) Take along Subhash to school.
  - (3) Tell Subhash the importance of studies and ask him to control the temptation for magic show.
  - (4) Complain to his parents that instead of going to school he keeps watching magic show.

**SPACE FOR ROUGH WORK**

A	B	C	D	E	F	G	H	I	J	K	L	M	N	O	P	Q	R	S	T	U	V	W	X	Y
---	---	---	---	---	---	---	---	---	---	---	---	---	---	---	---	---	---	---	---	---	---	---	---	---

74. 'जलयुक्त शिवार' कार्यक्रमासाठी ग्रामपंचायतीने नागरिकांना श्रमदानाचे आवाहन केले आहे, अशावेळी अथर्वची कोणती कृती योग्य ठरेल?

- (1) अथर्व कुटुंबासोबत बाहेर फिरायला जायचा बेत आखेल.
- (2) अथर्व श्रमदानाचे महत्त्व समजून आनंदाने श्रमदानात सहभागी होईल.
- (3) जलयुक्त शिवार योजनेतील त्रुटी लोकांना सांगेल.
- (4) महत्त्वाचे काम आहे असे सांगून घरीच राहणे पसंत करेन.

75. शाळेत जाताना रस्त्यावर जादूचे खेळ चालू आहेत आणि तुमचा मित्र सुभाष तुम्हाला ते पाहण्यासाठी आग्रह करित आहे अशावेळी तुम्ही काय कराल?

- (1) सुभाषला तेथेच सोडून एकटाच शाळेत जाईन.
- (2) सुभाषला ओढत शाळेत घेऊन जाईन.
- (3) सुभाषला अभ्यासाचे महत्त्व सांगून जादूच्या खेळाचा मोह आवरण्यास सांगेन.
- (4) सुभाषच्या घरी जाऊन तो शाळेत न येता खेळ बघतो. अशी त्याच्या पालकांकडे तक्रार करेन.

कच्च्या कामासाठी फक्त

SPACE FOR ROUGH WORK