

PRE UPPER PRIMARY SCHOLARSHIP EXAMINATION (Std. 5<sup>th</sup>), FEBRUARY 2018

Seat No.

**0 4 0 2**

Set

**A**

Paper No. II

Pages: 32

**Medium : Gujarati**  
**Third Language and Intelligence Test**

Time: 1:30 to 3:00

Total Marks :150

Read the following instructions carefully before you answer the questions.

- (1) This question paper contains two sections. In Section I there are **1 to 25** questions of Third Language and in Section **II** there are **26 to 75** questions of Intelligence Test. All **75** questions are compulsory.
- (2) All questions carry **2** marks each.
- (3) Time limit to solve the question paper is **90** minutes.
- (4) Separate answer sheet is given to record the answers. Each question has been given four alternatives. Read them carefully. Select the correct answer and shade the correct answer in the answer sheet.  
Example :- If the correct alternative for Q. No. **6** is **2**, then record your answer as follows:  
Question No. **6**            ①   ●   ③   ④
- (5) Answer recorded in any other form will not be considered. Such answer will be credited with 'Zero' mark.  
Example: ①   ②   ●   ④
- (6) Use blue or black ball pen to darken the circle. Pencil is not allowed. Circles darkened by pencil will not be credited.
- (7) Once you have darkened the circle as correct alternative you cannot change it.
- (8) If more than one circle are darkened or overwriting is done, the answer will not be accepted.
- (9) The rough work is to be done in the space given under each page do on the last page or the question paper.
- (10) If you do not know the answer to any question, do not spend much time on it and pass on to the next one. If the time permits you can come back to the question which you have left in the first instance and try them again.
- (11) If you find any question incomplete or with error, then or not ask anything to the Supervisor or Centre Incharge.
- (12) For any error/mistake/objection issues, school or parents should not send written application to Block Education Officer or Education Officer. These error/ mistake/objection issues should be register online through respective school login only.
- (13) The error/ mistake/ objection issues should be register online within 10-days from the publication of Interim answer key on MSCE website.
- (14) Questions can be cancelled due to printing mistake or any other reason, on the basis of the suggestions given by the Committee of Experts.
- (15) Along with the question paper of the respective medium, the English version of question paper is also provided. In case of doubt please refer to the English version of the same question.

# विभाग I

## तृतीय भाषा

Instructions for Q. Nos. 1 to 3 : Read the passage carefully and answer the following questions.

The horse is a common tame animal. After the cow, buffalo and the goat; it is the most useful animal. A horse is used for riding, in hunting. It draws our carts. It is very faithful.

1. Select the correct option.

The horse is most \_\_\_\_\_ animal.

- (1) useless                      (2) harmful                      (3) careless                      (4) useful

2. Choose the animal which is not mentioned in the given passage.

- (1) cow                      (2) bullock                      (3) buffalo                      (4) goat

3. Select the correct alternative.


A horse is not used for \_\_\_\_\_

- (1) riding    (2) drawing carts  
(3) nothing    (4) hunting

4. Select the mismatched pair.

- (1) actor – tractor    (2) cricket – sachet  
(3) tower – power    (4) plastic – elastic

5. Observe the picture carefully and select the proper motto.



- (1) We love books    (2) Protect all animals  
(3) Health is wealth    (4) Protect all plants

6. Arrange the numbers properly and make the meaningful word.

a	r	e	f	t	v	i	u	o
1	2	3	4	5	6	7	8	9

- (1) 41893762      (2) 416982753      (3) 213457698      (4) 541628739

7. The sign  indicates that one should \_\_\_\_\_.

- (1) go straight      (2) turn left      (3) up ward      (4) turn right

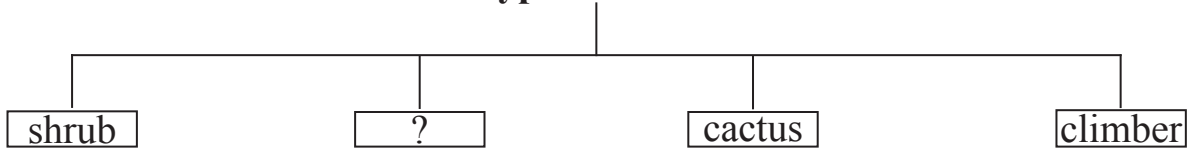
8. Select the correct alternative.

We should cut our nails \_\_\_\_\_.

- (1) daily      (2) early      (3) carelessly      (4) regularly

9. Choose the correct alternative.

**Type of Plants**



- (1) bud      (2) root      (3) stem      (4) herb

10. Choose the correct option for making a request.

My friend Arnav forgot his eraser and wants to borrow it \_\_\_\_\_.

- (1) I brought your eraser.      (2) Please, give me your eraser.  
 (3) Can I give my eraser to you?      (4) Find my eraser.

11. Complete the grid by choosing proper set of alphabets.

c									
r									
	s	t	r	i			h		
w					r				
					a				
					n				
						a	g	l	e

- (1) a, i, g      (2) p, k, l      (3) o, k, e      (4) o, c, e

12. Choose the correct option for the given word.

shape

- (1) aroma                      (2) rough                      (3) brick                      (4) vapour

13. Select the correct punctuation mark that mentioned in the given sentence.

Well done Rahim!

- (1) Exclamation mark                      (2) Question mark  
(3) Full stop                      (4) Comma

14. If pigs: squeal : then wolves : ?

- (1) howl                      (2) growl                      (3) squeak                      (4) croak

15. Observe the picture and choose the correct expression.



- (1) How sad!                      (2) What a surprise?  
(3) How miserable!                      (4) What a pity!

16. Fill in the blank by using the correct article.

The cow is \_\_\_\_\_ useful animal.

- (1) an                      (2) a                      (3) the                      (4) no article.

17. Select the correct option.

Vedant and his team won the football match.

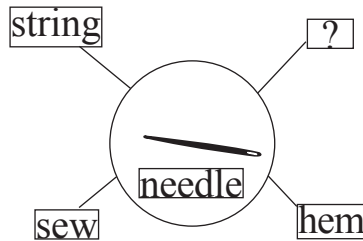
Their friends said, \_\_\_\_\_.

- (1) Congratulations!                      (2) Best of luck!  
(3) Happy birthday!                      (4) Good bye!

18. Choose the correct sentence showing correct position of a comma (,).

- (1) I ordered potatoes, sugar, eggs, and coffee.  
(2) I ordered, potatoes, sugar, eggs and coffee.  
(3) I ordered potatoes, sugar, eggs and coffee.  
(4) I ordered potatoes sugar eggs, and coffee.

19. Select the correct option.



- (1) toss                      (2) spill                      (3) blink                      (4) stitch

20. Solve the riddle.

It has three blades. They go round and round.

It gives cool air. What is it?

- (1) a fan                      (2) a lamp                      (3) a refrigerator                      (4) an oven

21. Select the correct speech for the given picture.

- (1) What's wrong?  
(2) I don't know.  
(3) I can't hear you.  
(4) I don't like it.



22. Select the suitable phrase for the given sentence.

\_\_\_\_\_ there lived a king.

- (1) Long long ago                      (2) Many years from now  
(3) Day after tomorrow                      (4) Just now

23. Choose the correct punctuation mark for the given sentence.

Are you ready:

- (1) Full stop                      (2) Question mark                      (3) Comma                      (4) Apostrophe

24. Fill in the blanks with the correct option.

I wash my hands \_\_\_\_\_ and \_\_\_\_\_ eating.

- (1) near and close                      (2) up and down  
(3) over and under                      (4) before and after

25. Select the proper alternative.

I brush my teeth \_\_\_\_\_ a day.

- (1) two                      (2) twice                      (3) too                      (4) first

## Section II

### Intelligence Test

26. “અડાબીડ ગુજરાત અખંડિત ભારત કેરી શાન, સાઈ કહે આ ધરતી ઉપર મહેમાનો ભગવાન “આ કાવ્ય પંક્તિમાં અકારાંત શબ્દો કરતાં ઈકારાંત શબ્દ કેટલાથી ઓછા છે કે વધારે છે ?

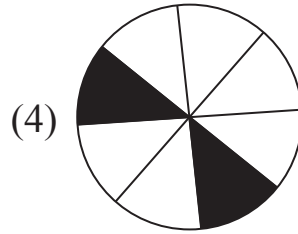
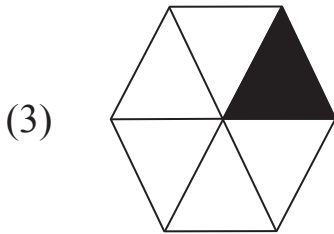
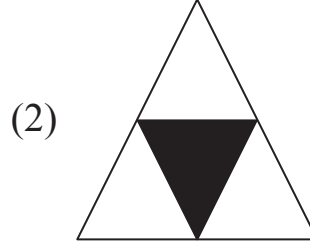
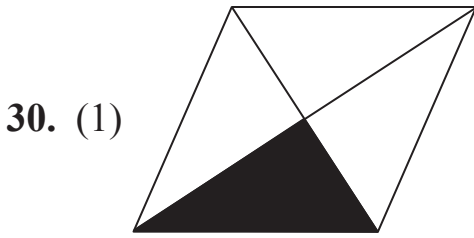
- (1) 3 જેટલા વધારે (2) 4 જેટલા ઓછા છે.  
 (3) 3 જેટલા ઓછા (4) 4 જેટલા વધારે

પ્રશ્ન-27 થી 31 માટે સૂચના : જૂથમાં બંધ બેસતું ના હોય તે પદ ઓળખો.

27. (1) 17 (2) 290 (3) 730 (4) 71

28. (1) 319 (2) 232 (3) 251 (4) 174

29. 1) રસનીરસ 2) કામકાજ 3) રીત રિવાજ 4) સાધુસંત



કચ્ચ્યા કામાસાઠી જાગા

## Section II

### Intelligence Test

26. "Merit consists in doing good to others, sin in doing harm to others." In this sentence how many words having five letters each are more or less than the words having two letters each?

- (1) more by 2      (2) less by 1      (3) less by 2      (4) more by 1

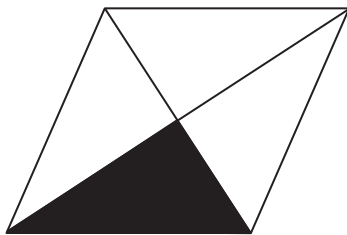
Instructions for Q. Nos. 27 to 31 : Find out the odd term.

27. (1) 17                      (2) 290                      (3) 730                      (4) 71


28. (1) 319                      (2) 232                      (3) 251                      (4) 174

29. (1) Preliminary      (2) Prehistoric      (3) Prepaid      (4) Preposition


30. (1)



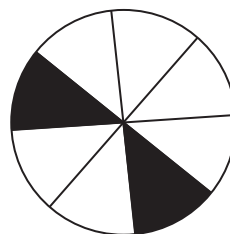
(2)



(3)



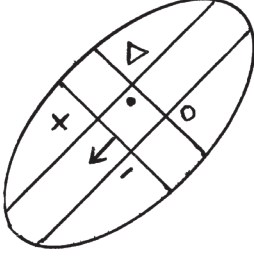
(4)



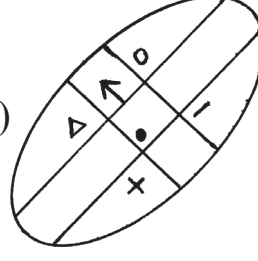
---

Space for Rough Work

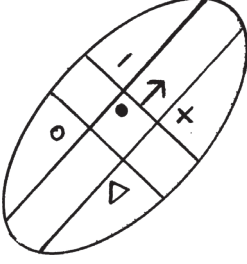
31. (1)



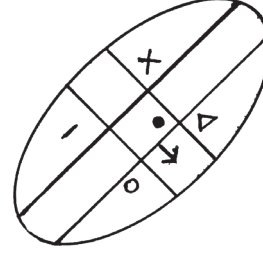
(2)



(3)



(4)



પ્રશ્ન 32 અને 33 માટે સૂચના : નીચેની સંખ્યાંમાળામાં પ્રશ્નચિહ્નના સ્થાને ક્રમાનુસાર આવનારી સંખ્યા પર્યાયમાથી શોધો.

32. 114, 85, 62, 43, ? 13

(1) 26

(2) 18

(3) 24

(4) 21

33. 11, 12, 16, 52, ? 92, 96

(1) 77

(2) 56

(3) 61

(4) 83

34. અમન ઓબામાની ઉત્તરે ૧૦ કિમી અંતર પર ઊભો છે. અને રફીકની વાયવ્યમાં 20 કિમી અંતરે ઊભો છે. તો રફીક ઓબામાની કઈ દિશામાં ઊભો છે ?

(1) પૂર્વ

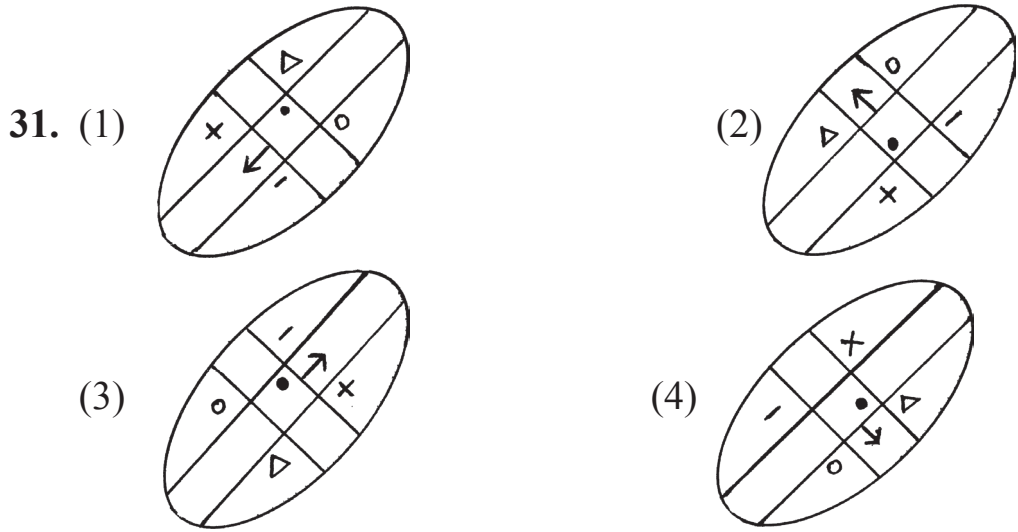
(2) પશ્ચિમ

(3) દક્ષિણ

(4) ઉત્તર

કચ્ચ્યા કામાસાઠી જાગા





**Instructions for Q. Nos. 32 to 33 :Observe the number series and find the correct alternative to replace the question mark. (?)**

**32. 114, 85, 62, 43, ? 13**

- (1) 26                      (2) 18                      (3) 24                      (4) 21

**33. 11, 12, 16, 52, ? 92, 96**

- (1) 77                      (2) 56                      (3) 61                      (4) 83

**34. Aman is standing 10 metres away from Obama facing North and 20 metres away from Rafiq facing NORTH-WEST, then in which direction is Rafiq standing to Obama?**

- (1) East                      (2) West                      (3) North                      (4) South

---

**Space for Rough Work**

35. નીચેના પર્યાયમાંની આકૃતિઓની ડાબી બાજુ અરીસો પકડતા કઈ આકૃતિ અરિસામાં એવીને એવી જ દેખાશે ?

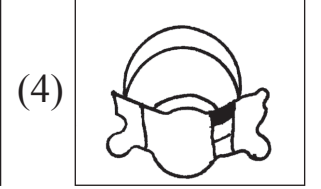
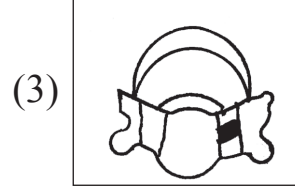
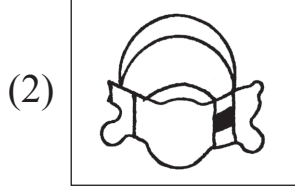
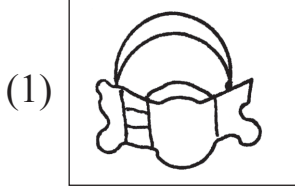
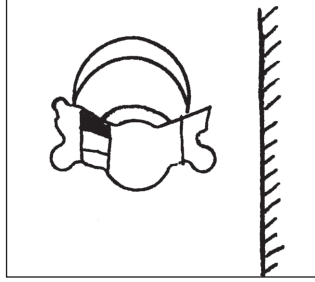
(1) HTH

(2) YNY

(3) I Z I

(4) OSO

36. પ્રશ્નમાની પ્રશ્ન આકૃતિની અરિસામાં પ્રતિમા કેવી દેખાશે ? તે પર્યાયી ઉત્તર આકૃતિમાથી નક્કી કરો.



37. ઓગસ્ટ મહિનાની ૬ તારીખે શુક્રવાર હોય તો તે જ મહિનાના છેવટના બુધવારે કઈ તારીખ હશે ?

(1) 31

(2) 25

(3) 27

(4) 30

કચ્ચ્યા કામાસાઠી જાગા

**35. If the mirror is held from the left side of the given figures. which figure will look as it is?**

(1) H T H

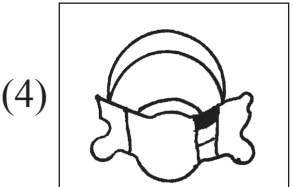
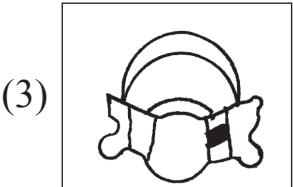
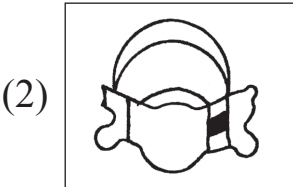
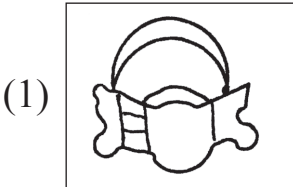
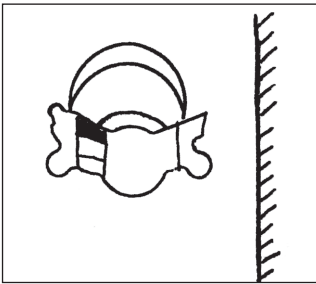
(2) Y N Y

(3) I Z I

(4) O S O

**36. Find the correct figure from the alternatives which is the mirror image of the question figure.**

**Question Figure**



**37. If 6th August was Friday, then in the same month what date it will be on last Wednesday?**

(1) 31

(2) 25

(3) 27


(4) 30

---

**Space for Rough Work**

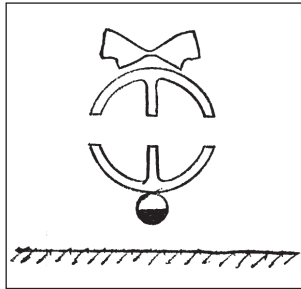
प्रश्न-38 38 अने 39 माटे सूचना : नीचेनी प्रश्नकृतिनुं पाणीमां प्रतिबिंब केवुं देभाशे ? ते पर्यायि उत्तर आकृतिमाथी नक्की करो.

38.



- (1) (2) (3) (4)

39.




- (1) (2) (3) (4)

कच्च्या कामासाठी जागा

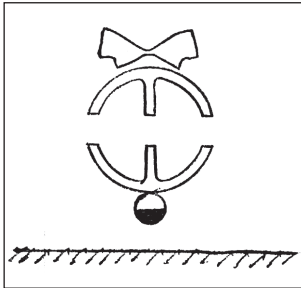
Instructions for Q. Nos. 38 to 39 : Select the correct figure that is water image of the question figure from the alternatives.

38. Question Figure



- (1) (2) (3) (4)

39. Question Figure



- (1) (2) (3) (4)

Space for Rough Work

અક્ષરમાલા : ABCDE FGHIJ KLMNO PQRST UVWXY

40. રેખાનો બીજો જન્મદિવસ 25 જુલાઈ 2009 ના રોજ શનિવારે હતો, તો તેનો જન્મ ક્યાં વારે થયો હશે ?

- (1) સોમવાર (2) મંગળવાર  
(3) બુધવાર (4) ગુરુવાર

પ્રશ્ન-41 આપેલી અક્ષરમાળામાં ક્યાં અક્ષરો સમાન વખત આવ્યા છે ?

અક્ષરમાળા: A B C D B A C A D C D A C D B C

- (1) A અને D (2) D અને C (3) A અને B (4) D અને B

પ્રશ્ન 42 થી 46 માટે સૂચના :આપેલા પ્રશ્નમાં પહેલા પદનો બીજા પદ સાથે જેવો સંબંધ રહે તેવો જ સંબંધ ત્રીજા અને ચોથા પદમાં છે. તે સંબંધ ઓળખો અને પ્રશ્નચિહ્નના સ્થાને આવનારો યોગ્ય પર્યાય શોધો.

42. ગોવા : પણજી : આસામ : ?

- (1) રાંચી (2) કોહિમા (3) દિસપુર (4) ગંગટોક

43. 3564 : 6 :: 7827 : ?

- (1) 2 (2) 8 (3) 12 (4) 10

44. 36 : 10 :: 27 : ?

- (1) 26 (2) 16 (3) 15 (4) 24

કચ્ચ્યા કામાસાઠી જાગા

**Alphabets : A B C D E F G H I J K L M N O P Q R S T U V W X Y**

**40. Rekha's second birthday was on Saturday 25th July 2009, then on what day was she born?**

- (1) Monday (2) Tuesday  
(3) Wednesday (4) Thursday

**41. In the given alphabetical series which letters are repeated same number of times?**

**Letters : A B C D B A C A D C D A C D B C**

- (1) A and D (2) D and C  
(3) A and B (4) D and B

**Instructions for Q. Nos. 42 to 46 : There exists a certain relation between first and second term. The same relation exists between third and fourth term. Considering this choose the correct alternative to replace the question mark (?)**

**42. Goa : Panaji :: Aassam : ?**

- (1) Ranchi (2) Kohima (3) Dispur (4) Gangtok

**43. 3564 : 6 :: 7827 : ?**

- (1) 2 (2) 8 (3) 12 (4) 10

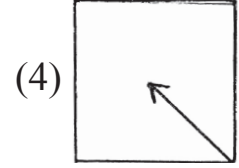
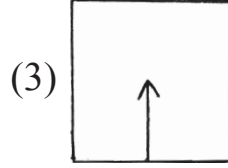
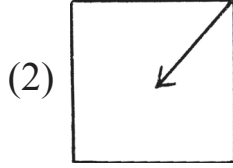
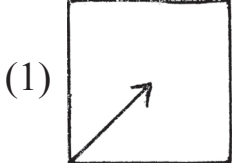
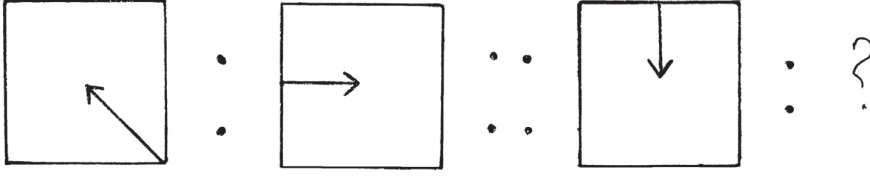
**44. 36 : 10 :: 27 : ?**

- (1) 26 (2) 16 (3) 15 (4) 24

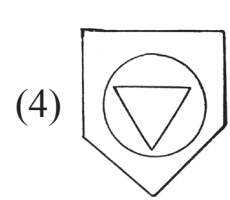
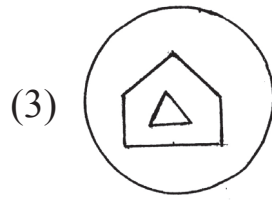
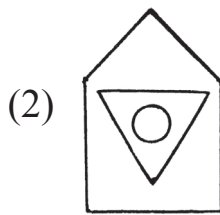
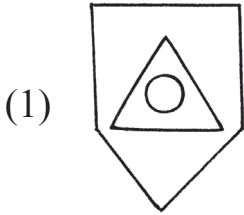
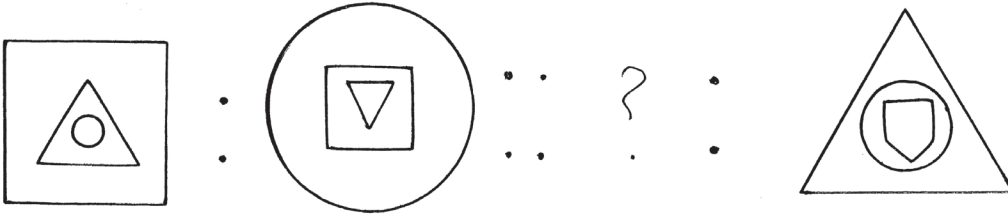
---

**Space for Rough Work**

45.



46.



47. नीचेनी संख्यामाणांमां अंकना स्थाननी अदलाबदली कर्या पछी डेटली मूण संख्या तैयार थशे ?

संख्यामाणा : 31, 59, 35, 19, 17, 34, 16, 89, 74

(1) 5

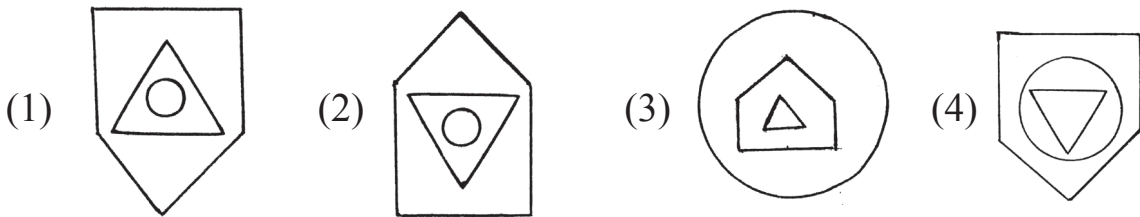
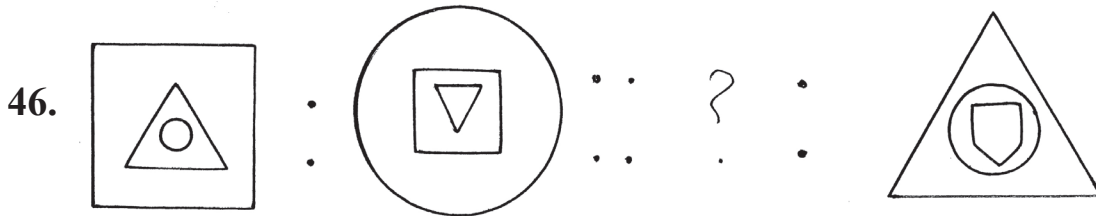
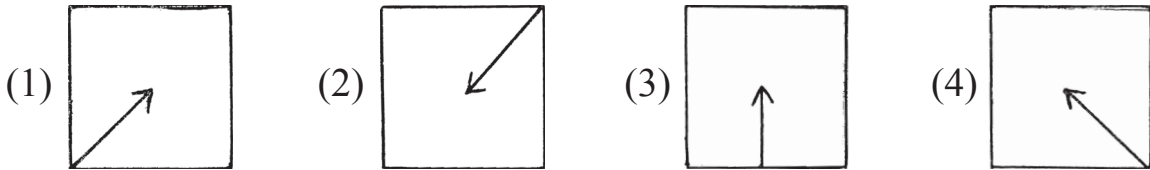
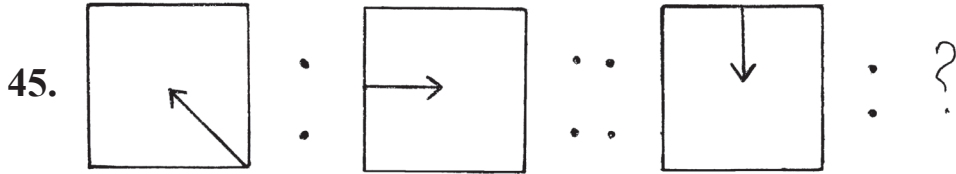
(2) 7

(3) 4

(4) 6

कच्च्या कामासाठी जागा





47. By interchanging the digits of the numbers in the given number series how many Prime numbers will form?

Letters: 31, 59, 35, 19, 17, 34, 16, 89, 74

- (1) 5                      (2) 7                      (3) 4                      (4) 6

Space for Rough Work

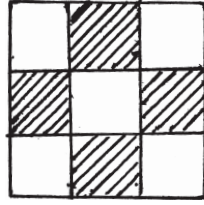
48. અક્ષરમાળા: ABCDE FGHIJ KLMNO PQRST UVWXY

ઉપરોક્ત અક્ષરમાળામાં “બ” અને “R” ના દરમિયાન જેટલા અક્ષરો છે તેના 3/5 ગણા અક્ષરો નીચેના પૈકી કયાં અક્ષરો દરમિયાન છે ?

- (1) 'B' અને 'H'      (2) 'K' અને 'S'      (3) 'H' અને 'O'      (4) 'D' અને 'H'

પ્રશ્ન 49 અને 50 માટે સૂચના : આપેલી પ્રશ્નઆકૃતિને બંધબેસતી આકૃતિ પર્યાયમાથી શોધો

49. Question Figure



- (1)      (2)      (3)      (4)

50. Question Figure



- (1)      (2)      (3)      (4)


કચ્ચ્યા કામાસાઠી જાગા

48. Alphabetical Series : ABCDE FGHIJ KLMNO PQRST UVWXY

Find out between which two letters the  $\frac{3}{5}$  th of the letters between G and R occurs in the above alphabetical series.

- (1) B and H      (2) K and S      (3) H and O      (4) D and H

Instructions for Q. Nos. 49 to 50 : Find out the figure from the alternatives which exactly matches the question figure.



- (1) (2) (3) (4)



- (1) (2) (3) (4)

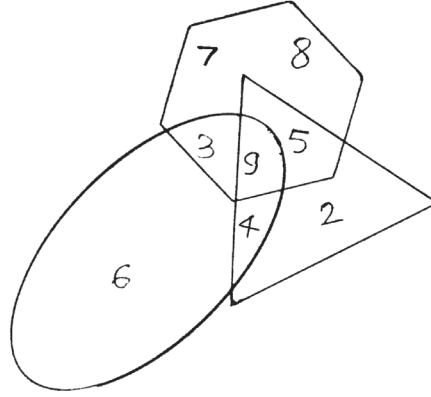
Space for Rough Work

51. નીચેના ચોક્કઠામાં પ્રશ્નચિહ્નના સ્થાને આવનારી સંખ્યા પર્યાયમાથી શોધો

2	8	5
7	3	9
3	?	4

- (1) 1                      (2) 0                      (3) 6                      (4) 10

પ્રશ્ન 52 અને 53 માટે સૂચના : આપેલી વેન આકૃતિનું નિરીક્ષણ કરીને તેના પર આધારિત પ્રશ્નના ઉત્તર પર્યાયમાથી શોધો.



52. ફક્ત ત્રિકોણ, ફક્ત લંબગોળ અને ફક્ત ષટ્કોણમાના અંકોનો સરવાળો કેટલો ?

- (1) 16                      (2) 23                      (3) 15                      (4) 27

53. ત્રણેય આકૃતિમાં સમાન હોય તેવો અંક કયો ?

- (1) 4                      (2) 5                      (3) 9                      (4) 3

54. એક સાંકેતિક ભાષામાં “5” ને “4” કહે છે, “8” ને “7” કહે છે, “4” ને “2” કહે છે તો તે જ સાંકેતિક ભાષામાં  $-4 + 3 \times 5 =$  કેટલા ?

- (1) 19                      (2) 36                      (3) 30                      (4) 60

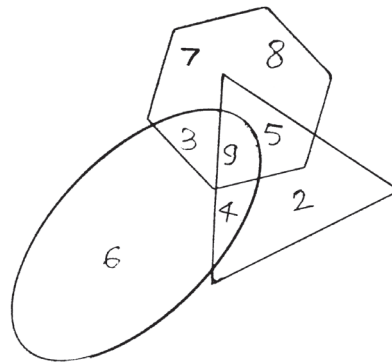
કચ્ચ્યા કામાસાઠી જાગા

51. See the number arrangement and find the number that will replace the question mark from the alternatives.

2	8	5
7	3	9
3	?	4

- (1) 1                      (2) 0                      (3) 6                      (4) 10

Instructions for Q. Nos. 52 to 53 : Observe the given Venn diagram and answer the questions based on that by selecting the correct alternative.



52. What is the total of the numbers given in the triangle, oval and hexagon only?

- (1) 16                      (2) 23                      (3) 15                      (4) 27

53. Which number is common in the three figures?

- (1) 4                      (2) 5                      (3) 9                      (4) 3

54. In a code language '5' is called '4', '3' is called '7', '4' is called '2', then in the same language  $4 + 3 \times 5 = ?$  (how much)

- (1) 19                      (2) 36                      (3) 30                      (4) 60

---

**Space for Rough Work**

55. એક સાંકેતિક ભાષામાં  $\otimes$  એટલે  $\div 7$  હોય અને

$$14 \otimes \bullet = 10$$

$$3 \bullet \square = 13$$

તો  $42 \otimes \square =$  કેટલા ?

(1) 4

(2) 9

(3) 6

(4) 5

પ્રશ્ન 56 થી 60 માટે સૂચના : નીચેના પ્રશ્નની શરૂઆતમાં ત્રણ પદ આપેલા છે. તેમાં કેટલીક વિશિષ્ટતાઓ છે તેથી તેમનું એક જુથ તૈયાર થાય છે. આ જૂથમાં બંધબેસતું પદ આપેલા પર્યાયમાથી નક્કી કરો.

56. મગજ, ફેફસા, હૃદય :

(1) જીભ

(2) હાથ

(3) ચક્રત

(4) પગ

57. 343, 27, 125 :

(1) 216

(2) 261

(3) 49

(4) 1

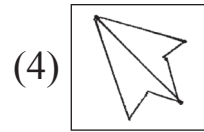
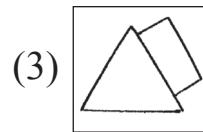
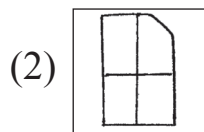
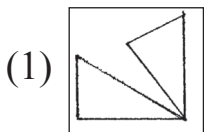
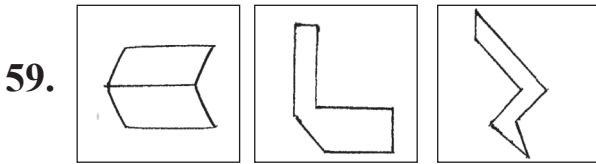
58. 8525, 7612, 9372 :

(1) 5824

(2) 6083

(3) 3701

(4) 9824



કચ્ચ્યા કામાસાઠી જાગા

55. In a code language  $\otimes$  means  $\div 7$

like wise  $14 \otimes \bullet = 10$

$3 \bullet \square = 13$

Then  $42 \otimes \square =$  how much?

- (1) 4                      (2) 9                      (3) 6                      (4) 5

**Instructions for Q. Nos. 56 to 60 :** In each of the following questions three words are given with some common relation, so their group is formed. Select the word from the alternatives given which has the same common feature of the given group.

56. Brain, Lungs, Heart, \_\_\_\_\_

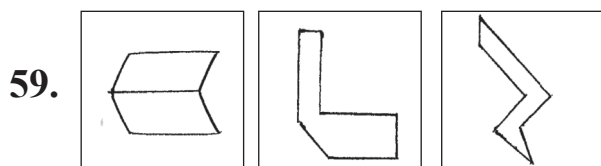
- (1) tongue              (2) hand              (3) liver              (4) leg

57. 343, 27, 125, \_\_\_\_\_

- (1) 216              (2) 261              (3) 49              (4) 1

58. 8525, 7612, 9372, \_\_\_\_\_

- (1) 5824              (2) 6083              (3) 3701              (4) 9824



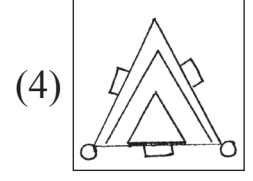
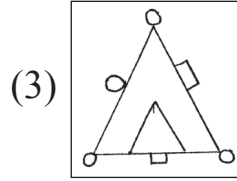
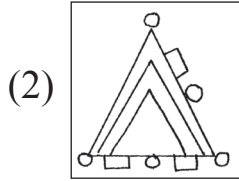
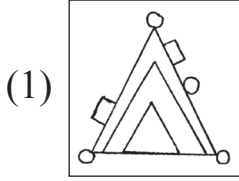
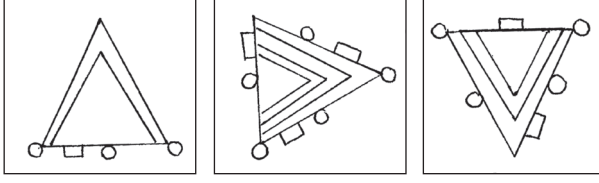
•  
•

- (1)       (2)       (3)       (4) 

---

**Space for Rough Work**

60.



61. नीचेना कोठानुं निरीक्षण करी तेना पर आधारित प्रश्नोनां उत्तर पर्यायमाथी शोधो

अक्षरो	A	B	C	H	I	O	P	R
चिह्नो	$\Delta$	$\blacktriangledown$	$\bullet$	+	$\times$	<	$\neq$	=

'POOR' आ शब्दो विरोधी शब्द केवी रीते लभाशे ?

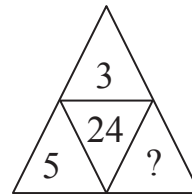
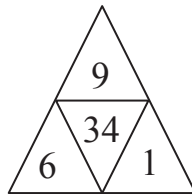
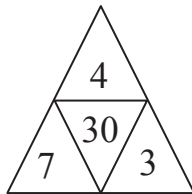
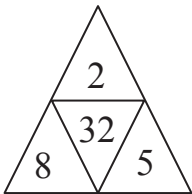
(1)  $\neq < < =$

(2)  $= \times \bullet +$

(3)  $\angle \neq \Delta \blacktriangledown$

(4)  $= \times \blacktriangledown +$

62. प्रश्न चिह्ना स्थाने आवनारी संख्या पर्यायमाथी शोधो



(1) 2

(2) 5

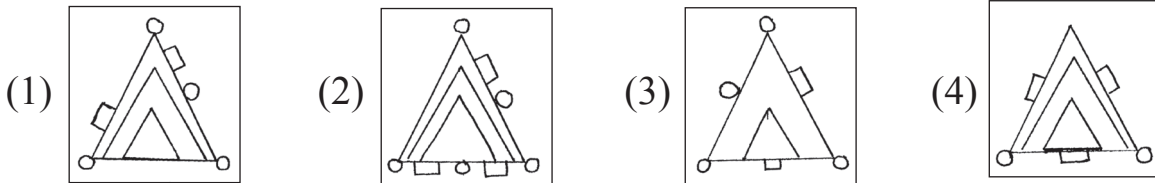
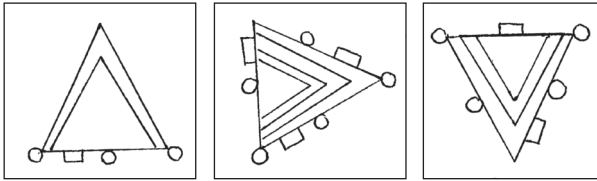
(3) 4

(4) 3

कच्या कामासाठी जागा



60.



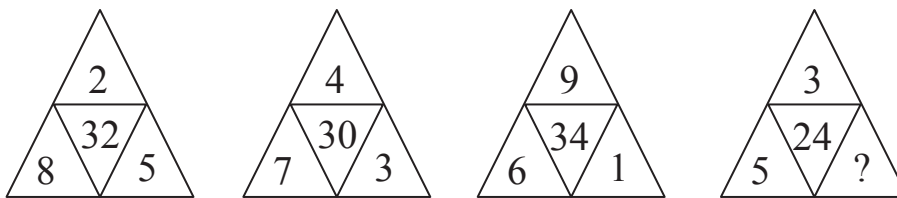
61. In the following table letters are replaced by symbols.

Letters	A	B	C	H	I	O	P	R
Symbols	$\Delta$	$\blacktriangledown$	$\bullet$	+	$\times$	<	$\neq$	=

Using above symbols, how will opposite of 'POOR' be written?

- (1)  $\neq < < =$  (2)  $= \times \bullet +$   
 (3)  $\angle \neq \Delta \blacktriangledown$  (4)  $= \times \blacktriangledown +$

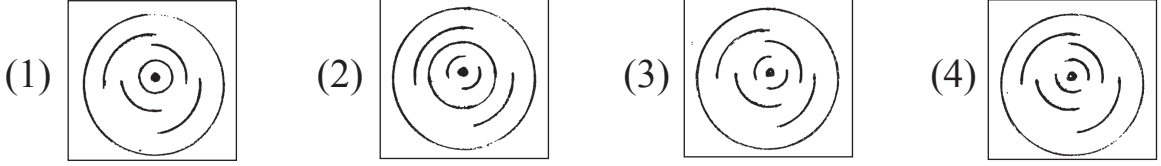
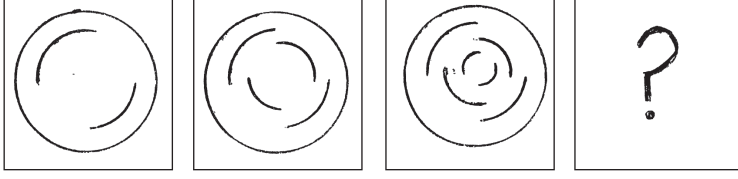
62. Observe the arrangement of numbers. Find the correct alternative to replace the question mark (?)



- (1) 2 (2) 5 (3) 4 (4) 3

Space for Rough Work

63. નીચેની આકૃતિઓમાં વિશિષ્ટ પ્રકારનો ક્રમ છે. તે ઓળખીને પ્રશ્નચિહ્નના સ્થાને કઈ આકૃતિ આવશે તે શોધો.



64. હાથીને વાઘ કહીએ, વાઘને સસલું કહીએ, સસલાને સિંહ કહીએ, સિંહને રીંછ કહીએ તો આપણું રાષ્ટ્રીય પ્રાણી કોને કહીશું ?

- (1) વાઘ (2) સસલું (3) હાથી (4) સિંહ

65. નીચેની ચિન્હમાળા પ્રશ્નચિહ્નના સ્થાને ચિહ્નનો કયો સમૂહ આવશે ?



- (1) ☆ ■▷○□ (2) ■▷☆○□  
 (3) ☆▷■○□ (4) ☆■○▷□

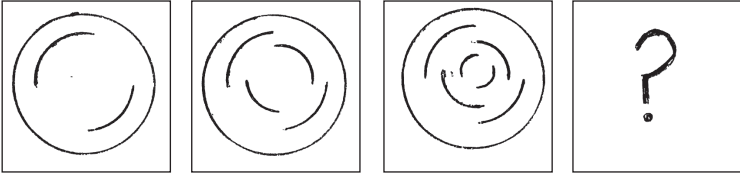
66. આપેલી સંખ્યામાળામાં અયોગ્ય પદ ઓળખો

11, 27, 51, 83, 102, 171

- (1) 51 (2) 27 (3) 171 (4) 102

કચ્ચ્યા કામાસાઠી જાગા

63. There is a typical order in the given figures observe them and select the correct alternative to replace the question mark (?)



- (1) (2) (3) (4)

64. If elephant is called tiger, tiger is called rabbit, rabbit is called lion, and lion is called bear, then who will be called our national animal?

- (1) tiger                      (2) rabbit                      (3) elephant                      (4) lion

65. Observe the given series and find out which symbols will replace the question mark (?)



- (1) (2) (3) (4)

66. In the given number series find out the odd term.

11, 27, 51, 83, 102, 171

- (1) 51                      (2) 27                      (3) 171                      (4) 102

Space for Rough Work

67. એક સાંકેતિક ભાષામાં BAT = 278, ANT = 276, NET = 765 એમ લખાય છે, તો તે જ સાંકેતિક ભાષામાં “BEAN” આ શબ્દ કેરી રીતે લખાશે ? (અક્ષરો અને ચિહ્નનો ક્રમ સરખો જ હશે એવું નથી)

- (1) 8572                      (2) 8526                      (3) 7685                      (4) 8356

68. નીચેના પૈકી કોની ક્રુતિ અયોગ્ય છે ? તે પર્યાયમાથી શોધો :

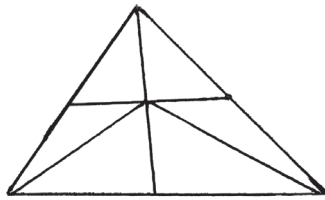
- (1) અદિતિ નિર્માલ્યમાથી કંપોસ્ટ ખાતર તૈયાર કરે છે.  
 (2) શર્વિન કાયમ બજારમાથી વસ્તુ પ્લાસ્ટિકની થેલીમાં જ લાવે છે.  
 (3) રુકશાના સામાજિક કાર્યમાં સક્રિય સહભાગ લે છે.  
 (4) પલક પ્રદૂષણ વિરોધી જાહેરાત કરે છે.

69. છોકરાની હાલની ઉંમર માતાની હાલની ઉંમરના  $\frac{1}{2}$  ગણા કરતાં 4 જેટલી ઓછી છે અને માસીની હાલની ઉંમરના  $\frac{1}{3}$  ગણા કરતાં 2 જેટલી વધારે છે જો માતાની હાલની ઉંમર 42 વર્ષ હોય તો મસીની બે વર્ષ પહેલાની ઉંમર કેટલા વર્ષની હશે?

- (1) 43                      (2) 45                      (3) 47                      (4) 40

70. આપેલી આકૃતિમાં કુલ કેટલા ત્રિકોણ છે ?

- (1) 9  
 (2) 13  
 (3) 15  
 (4) 12



71. પાંચ લોકોની દોડવાની સ્પર્ધામાં જોનના આગળ અહમદ હતો. અહમદ અને સમીરની વચ્ચે ફક્ત ગૌતમ હતો. જોન અને અહમદના વચ્ચે હરભજન હતો, તો મધ્યમાં કોણ હતું ? (1) જોન                      (2) સમીર                      (3) ગૌતમ                      (4) અહમદ

કચ્ચ્યા કામાસાઠી જાગા

67. In a code language BAT = 278, ANT = 276, NET = 765, then in the same code how 'BEAN' is written? (It is not necessary that the order of the letters and number is same.)

- (1) 8572                      (2) 8526                      (3) 7685                      (4) 8356

68. From the given statements whose activity is incorrect. Choose the correct alternative.

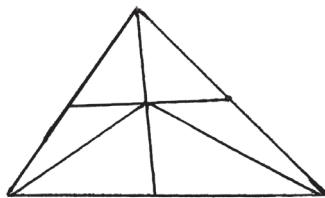
- (1) Aditi prepares compost manure from the dried flowers and leaves.  
 (2) Sharvin always brings things from the market in plastic bags.  
 (3) Rukhsana actively participates in the social activities.  
 (4) Palak promotes antipollution advertisement.

69. A son's present age is 4 less than  $\frac{1}{2}$  of the mother's present age and 2 more than  $\frac{1}{3}$  rd of the aunt's present age. If the present age of his mother is 42 years then what was the age of his aunt two years ago?

- (1) 43                      (2) 45                      (3) 47                      (4) 40

70. How many triangles are there in the given figure?

- (1) 9  
 (2) 13  
 (3) 15  
 (4) 12



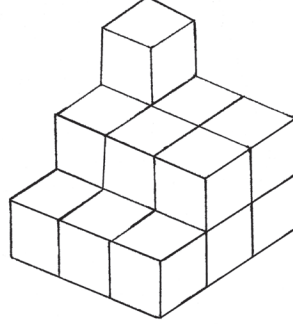
71. In a running race of 5 students, Ahmed was ahead of John. Gautam was between Ahmed and Sameer. Harbhajan was between John and Ahmed. who was at the centre?

- (1) John                      (2) Sameer                      (3) Gautam                      (4) Ahmed

---

**Space for Rough Work**

72. નીચેની આકૃતિમાં દર્શાવ્યા પ્રમાણે સમાન આકારના ઘનની માંડણી કરીને એક પ્રતિકૃતિ તૈયાર કરીએ તો તેને કુલ કેટલા પૃષ્ઠ હશે ?

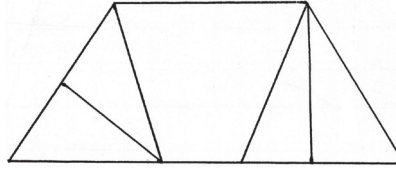


- (1) 12                      (2) 8                      (3) 10                      (4) 11

73. એક 1.5 કિમી લંબાઈના રસ્તાની બંને બાજુએ લંબાઈ 60 મી. અંતર પર એક વિદ્યુતનો થાંભલો આ પ્રમાણે વિદ્યુતના થાંભલા લગાડતા કુલ કેટલા થાંભલા લાગશે?

- (1) 25                      (2) 26                      (3) 50                      (4) 52

74. આપેલી આકૃતિમાં કુલ કેટલા ચતુસ્કોણ છે ?



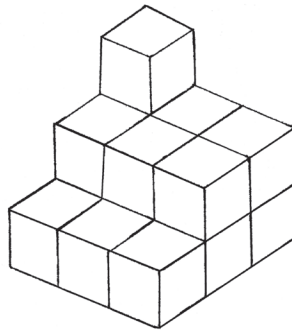
- (1) 5                      (2) 4                      (3) 7                      (4) 6

75. શિક્ષક વર્ગમાં ન હતા ત્યારે વર્ગમાના બે વિદ્યાર્થીઓ વચ્ચે ઝગડો શરૂ થયો, તો તમે વર્ગપ્રમુખ તરીકે પ્રથમ કઈ કૃતિ કરશો ?

- (1) તે બંને કેવી રીતે ઝગડે છે તે જોતાં રહેશો.  
 (2) ઝગડાનો વિષય વર્ગ શિક્ષકને જણાવશો.  
 (3) બંનેને સમજાવશો અને ઝગડો ઉકેલવાનો પ્રયત્ન કરશો.  
 (4) તે બંનેનો નિષેધ કરશો.

કચ્ચ્યા કામાસાઠી જાગા

72. The clues of same dimension are arranged according to the given figure and a new figure is formed. How many faces will be there of such figure?

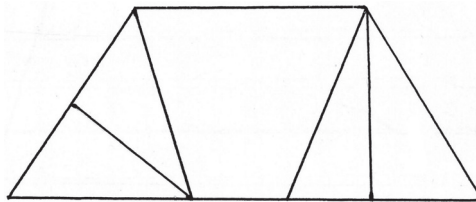


- (1) 12                      (2) 8                      (3) 10                      (4) 11

73. If the electric poles are erected at 60m distance on 1.5 km long road on both the sides, how many poles will be erected?

- (1) 25                      (2) 26                      (3) 50                      (4) 52

74. What is the number of quadrilaterals in the adjacent figure?



- (1) 5                      (2) 4                      (3) 7                      (4) 6

75. The teacher is not in the class and two students enter into a quarrel. What will you do as a monitor?

- (1) You will see how they fight.  
 (2) Inform the subject of fight to the class teacher.  
 (3) You will convince them and try to sort out the issue.  
 (4) You will prohibit both of them.

---

**Space for Rough Work**

**Space for Rough Work**