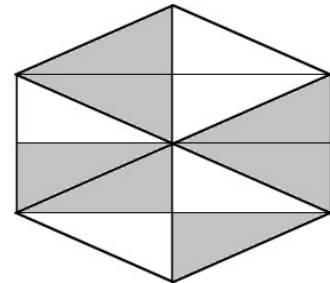


SAMPLE PAPER- 1

Question-1

What fraction of figure is shaded?

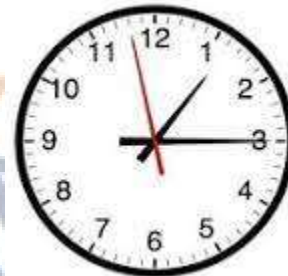
- A. three seventh
- B. Seven Twelfth
- C. one quarter
- D. One half



Question-2

Can you guess the time ?

- A. 01:15:02
- B. 01:15:58
- C. Quarter to three
- D Quarter past two



Question-3

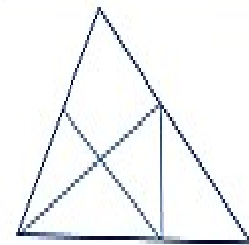
Sourabh is building a pyramid using blocks of same size. I he keeps 9 blocks in base then second layer he used 7 blocks then third layer he used 5 blocks .If he continues the pattern how many blocks will he use in the fifth layer ?

- A. 7
- B. 5
- C 1
- D 3

Question-4

What are the number of triangles present in the figure?

- A. 4
- B 7
- C 11
- D-9



Question-5

Which one of the mathematical statement is true?

- A. $3793=3000+79+3$
- B. $56286=56000+280+86$
- C. $40044=40440+400$
- D. $3325=3000+300+20+5$

SECTION-B SCIENCE**Question 6**

Our kitchen is a small medical store. Name two natural plant ingredients (having medicinal qualities) that your mother gives you when you are sick.

- A. Turmeric , salt B.Saffron,milk
- C. ginger,turmericD.garlic,soda

Question 7

Name food items:-

a) made of wheat___b) made of rice ___c) made of milk__

A a)chapati, b)idli, c)butter

- B. a)dosa,b)pulao,c)nan
- C. a)Bread,b)idli,c)dosa
- D. a)Butter, b)vada,c)cake

Question 8

Fill up the given blanks with correct words from the hints.



a) We should not _____ food. (eat / waste) b) Junk food is _____ for health. (good / bad). c) We should _____ your family members in the household work. (help / not help)

- A a) eat b)good c)not help B a)waste b) bad c)not help
C a)waste b) good c)help D a)waste b)bad c)help

Question 9

Write T for true and F for false

a) Decorating our house will make it look more beautiful. () b) You should not inform your PARENTS when you leave the home. () c) It is everyone's duty to ensure the cleanliness of house. () d) We should not keep things at their proper place. ()

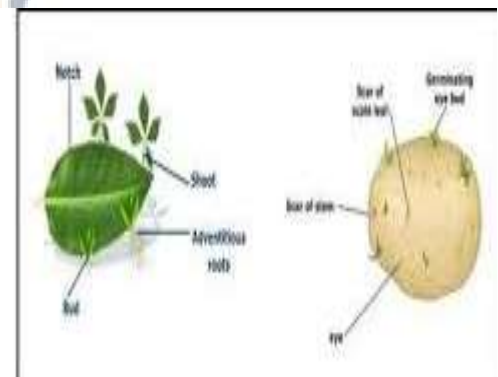
- A-TFFF B- TTFF C -T FTF D-TTTT

Question 10

Vegetative propagation is a **type of reproduction** where a vegetative part of the plant is used to reproduce a new plant. The plant produced by vegetative propagation is identical to its parent.

Name the part shown in picture that is responsible for the development of new plant.

- A root stem
B root leaf
C leaf flower
D leaf stem



Question 11

These are following steps in farming as they are done:-Watering,
Storing, Ploughing ,Cutting the crops, Sowing,Taking out weeds

Find the correct sequence of tools that help in these underlined steps of agriculture.

- A- Sickle, planter, silos, sprinklers
- B- Irrigation canals, silos, sickle, khurpi
- C -sprinkler, silos , khurpi , pipel
- D -khurpi, harvester, hosepipe, silos

Question-12

Choose the incorrect statement.

- (1) We can grow tea in Rajasthan.
- (2) Rice and jowar are Kharif crops.
- (3) A maize seed has one seed leaf.
- (4) Potato has an eye.

- A. Statement 3
- B. Statement 2
- C. Statement 1
- D. Statement 4



Question 13

Choose the correct answers from the three for the statement.

- (1) Amoeba /dolphin/parrot breathes through its body surface.
- (2) Emu/Eagle/butterfly cannot fly.
- (3) Cat/rabbit/lion gnaw seeds and fruits from small and sharp front teeth.
- (4) Snakes/rabbit/monkey has no legs so,it crawls.

- A. Parrot,butterfly,lion,snakes
- B. Amoeba, Emu, Rabbit, Snakes
- C. Emu,Rabbit,Snakes,Amoeba
- D. Dolfin,rabbit,cat,monkey

Question 14

Which gas is given out by plants and which gas is taken in by animals ?

- A. Oxygen,oxygen
- B. Water,oxygen
- C. Oxygen,carbon dioxide
- D. Minerals,carbondioxide

Question 15

Bundle of fibres : nerves::taste buds:_____

- A.nose
- B.tongue
- C.teeth
- D. Hair

SECTION_C ACHIEVER'S SECTION



Question 16

The images below show a food chain. Which organism would most likely come between the snake and the fox in the food chain?

- A. peacock
- B. mongoose
- C. both A & B
- D grasshopper

Question-17

CHOOSE THE CORRECT OPTIONS

- I) Food that we eat only when cooked _____
- II) Food that we eat raw _____
- III) Food that we eat both raw as well as cooked _____

A(I) rice(ii)cucumber (iii)tomato

B(I)spinach (ii) gourd (iii) bitter gourd

C(I)egg (ii) meat (iii) onion

C. (i) garlic (ii)rice (III)wheat

Question-18

I have FISH in my name ,Who Am I?

X=I am not a fish.I damage your expensive clothes.

Y=I am not a fish but stay underwater .I can regenerate myself if you cut.

Z=I am also not a fish but I swim in saline water and is very soft .

- A. X-mermaid Y-fisherwoman Z-jellyfish
- B X = silver fish Y = starfish Z= jellyfish



X=starfish Y= silverfish Z= jellyfish
D X= jellyfish Y=starfish Z=silverfish

Question-19

Malaria ,dengue and chikungunya are

- A deficiency disease B communicable disease
C non-communicable disease D occupational disease

Question-20

Which group of vegetables are roots?

- A. Spinach, Fenugreek , Coriander , Mustard
B. Radish,, Carrot, Beet, turnip
C. Cauliflower, Broccoli, Peas
D. Brinjal, Jackfruit, Tomato, Cucumber

MARKING SCHEME FOR MOCK TEST-1 _SCIENCE_CLASS-V

1-B	2-B	3-C	4-D	5-D					
6-C	7-A	8-D	9-C	10-D	11-B	12-C	13-B	14-A	15-B
16-C	17-A	18-B	19-B	20-B					

