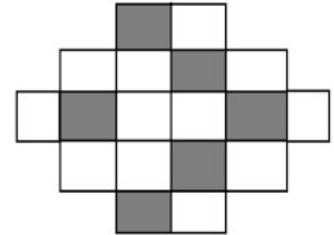


SAMPLE PAPER- 1

Question-1

What fraction of figure is shaded?

- A. One Third
- B One half
- C Two thirds
- D one fourth



Question-2

What is the time shown by the clock ?

- A. quarter past 12
- B quarter to 1
- C quarter past 1
- D quarter to 3



Question-3

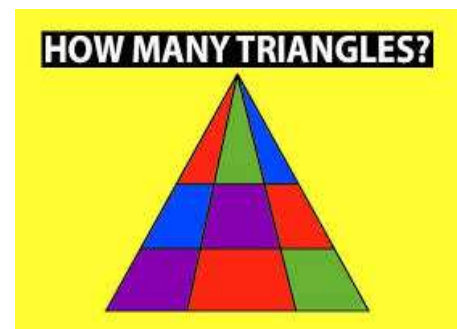
What is the number at place of thousand in the number 45987?

- A. 5
- B 9
- C 4
- D 8

Question-4

Count the number of triangles in the given figure?

- A. 8



B 12

C 22

D-18

Question- 5

Find the value of ?

$$\triangle - \square = ?$$

If $\triangle \div \square = 84$

$$\square + \square + \square + \square + \square = 15$$

A. 309

B 249

C 252

D 255

SCIENCE

Question 6

Which of the following is false.

A-Plant - jute

B-Animal -jute

D-Plant - cotton

C-Animal – leather



Question 7

Naphthalene balls are kept between layers of clothes to

- A-make clothes brighter
- B-make clothes smell better
- C-protect clothes from insects
- D-adjust the size of clothes.

Question 8

The Hawker street culture is gaining speed nowadays. We should avoid eating from roadside vendors in monsoon. Choose the incorrect statement from the given following.

- A. They use very good quality of butter.
- B. They use the water from any source that cannot be filtered.
- C. They may not clean and wash the vegetables and use low quality spices.
- D. They don't take care of hygiene and use sweaty hands in preparing dough.



Question 9

The plants that grow on land are called _____ and the plants that grows in water are called -----_plants.

- A. Desert, aquatic.
- B. Terrestrial, desert.
- C. Terrestrial, aquatic.
- D. Aquatic, terrestrial.

Question 10

Incisors ,canines ,premolars,molars are kind of

- A. Plants
- B. Animals
- C, Forces
- D, Teeth

Question 11

(i) The hardest part of tooth is _____ .

(ii) The innermost portion of the tooth is called the _____.

- A-(I)Pulp (ii)enamel
- B-(I)Enamel (ii)pulp
- C-(I)Crown(ii)pulp
- D-(I)dentine(ii)crown



Question 12

Which one is a body building food from animal source and not a part of vegetarian diet

- a) Milk b) Butter c) Meat d) Burger

Question 13

Name the disease you may get if you get a wound or a cut by a rusted object..... and bitten by a sick stray dog.....

- A. Rabies, tetanus
B. Vomiting, tetanus
C. Rabies, fever
D. tetanus, rabies

Question 14

Name a method to (i) remove water content of food and (ii) mixing of salt to food stuff.

- A (I) Dehydration, (II) pickling B (I) making jam (II) pickling

- C (I) dehydration (II) making jam

- D (I) pasteurization (II) vaccination

Question 15

The two things that keep away insects from silk and woollen clothes are-

- A. Mosquito repellent, mango seeds
B. Neem leaves, moth balls
C. mosquito coil, tea leaves

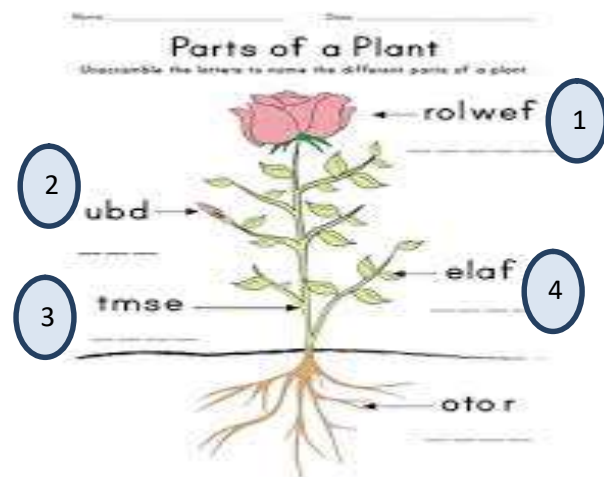


D.lotus flower, mosquitos repellant

Question-16

Unscramble the letters and find out the correct part of plant.Select the correct sequence from the given options-

- A. 1 flower, 2 bud, 3stem, 4leaf, 5roots
- B 1roots, 2flower , 3leaf, 4bud5 stem
- C 1flower, 2bud, 3leaf, 4roots, 5 stem
- D 1 flower , 2 root , 3 leaf , 4stem, 5bud



Question-17

Beena poured 1 L of water in three containers as shown in figures.She kept all the containers near window& wanted to keep fish . She put one fish in each with little water and checked the fish activity in water in three containers at regular intervals.Which observation is most correct when she observed after 4 days



- A. Bottle with cap shows more active fish.
- B Bottle with cotton cloth fish is active.
- C Bottle with cap fish has reproduced.
- D Bottle without cap fish has jumped out

Question-18



Some children want to find out how overcrowding can effect the way plants grow, what was their conclusion?

- A. Plants grow best in this method.
- B Plants compete with each other for sunlight ,water and nutrition .
- C plants share the water and minerals turn by turn.
- D plants bear more fruits.



Question-19

Clothes are worn according to occupation, activities and weather condition. Look at the picture carefully and identify the occupation/activity according to the clothes they are wearing-

| | | | |
|-----------|-------------------------|-------------------|-----------------------------|
| Column -1 | | | |
| Column-2 | P-Girl working in salon | Q-school students | R-dressed for a dance party |

A-1-R,2-P,3-Q

B -1-Q,2-R,3-P

C-1-P,2-R,3-Q

D-1-P,2-Q,3-R



Question-20

Swachh Bharat Abhiyan is a campaign launched by Prime Minister Narendra Modi as a nationwide cleanliness campaign. It was started in 2014 and is dedicated to Mahatma Gandhi. It was launched on 2 October, 2014. Swachhta includes personal hygiene as well as cleanliness of surroundings.

Read the statements. Write (TRUE) for the correct statement and (FALSE) for the wrong statement:-

- a) We should litter in parks and roads.
- b) We should co-operate our differently abled friends.
- c) We should not respect and take care of elderly people.
- d) We should not waste water.

A FTFT

B TFTF

C FFTT

D TTFF

MARKING SCHEME FOR MOCKTEST-1 _SCIENCE_ CLASS IV

| | | | | | | | | | |
|------|------|------|------|------|------|------|------|------|------|
| 1-B | 2-C | 3-A | 4-D | 5-B | | | | | |
| 6-B | 7-C | 8-A | 9-C | 10-D | 11-B | 12-D | 13-D | 14-A | 15-B |
| 16-A | 17-B | 18-C | 19-D | 20-A | | | | | |

