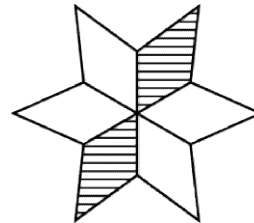


SAMPLE PAPER- 1

Question-1

What fraction of figure is shaded?

- A. two fourth
- B one third
- C one half
- D one sixth



Question-2

What time is the clock showing?

- A. 25 minutes to 12
- B 35 minutes past 12
- C quarter to 12
- D two quarters after 11



Question-3

What is the digit in hundred's place in the number 7459?

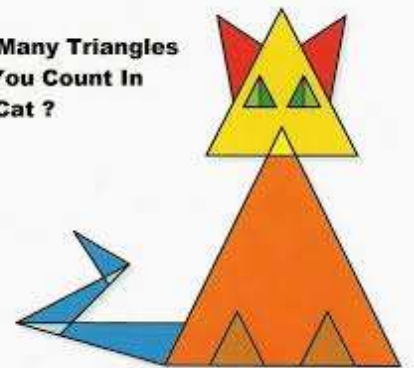
- A. 4
- B 5
- C 7
- D 9

Question-4

How many triangles are there in this cat?

- A 14
- B-7
- C-30
- D -20

How Many Triangles
Can You Count In
This Cat ?



Question-5



Rani bought two dolls for Rs 20 each and three small teddy bear for Rs 70 each and a toy car for Rs 80. How much money will she get back if she has given 1000 Rs to the cashier

- A. 470 B 570 C 600 D.500

SECTION-B SCIENCE

Question 6

Identify the bird that (I) can fly over the long distances.(ii) flightless bird

- A. (I) Crow,(ii)Woodpecker
B. (i) Siberian crane (ii) ostrich
C.(I) Pigeon (ii) Duck
D.(I) Vulture (ii) Crane

Question 7

Which of these birds uses its beak as a chisel to make holes in the materials like wood and tree trunk?

- A. Woodpecker
B. Weaver bird
C. Tailor bird
D. None of these



Question 8

Which of the following method is incorrect to preserve food as pickles and jams?

1. Keeping the food at high temperature
2. Keeping the food in airtight container
3. Salting and sugar
4. Keeping it in water and room temperature

A 1,2

B 4,3

C 2,3

D 1,4

Question 9

___ is an example of synthetic fiber and ___ is a natural plant fiber.

- A. Cotton, Silk
- B. Acrylic, Silk
- C. Polyester, Nylon
- D. Nylon, cotton

Question 10

I am a plant. My leaves are used as vegetable and seeds are used to produce oil. I grow on land. Who am I?

- A. Spinach
- B. Broccoli
- C. Lotus
- D. Mustard

Question 11

Guess-who am I?

(i) I have beautiful feathers- __ (ii) I fly very high and I eat mice- __ (iii) I am of green colour and I can imitate sounds-__

- A. (i) peacock (ii) Bat (iii) parrot
- B. (i) swan (ii) parrot (iii) Bat



- C. (i)Peacock (ii)butterfly (iii)Kite
D. (i)Kite (ii)hawk (iii)vulture

Question 12.

The house shown in the given picture is usually seen in:

- A. Haryana
B. Kerala
C. Madhya pradesh
D. Kashmir



Question 13

Which of the following is not a temporary house?

- A. Tent
B. Houseboat
C. caravan
D. Bungalow

Question 14

Sunlight in the house and mothball in trunk full of woollen clothes keep away.....

- A. Air B. germs and insects
C. thieves D. babies

Question 15

Select the correct sequence of the organisms seen in this picture from top to bottom

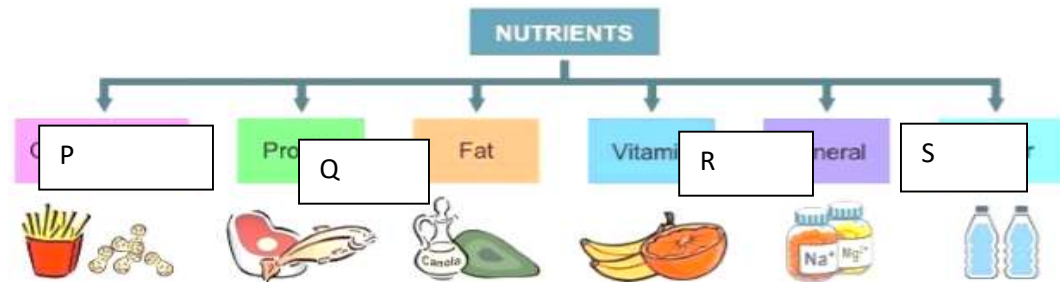
- A. Bear → wolf → plant → rabbit
B. Wolf → rabbit → bear → plant
C. Plants → rabbit → wolf → bear



D. Plants → rabbit → wolf → bear

SECTION_C ACHIEVER'S SECTION

Question16



Identify P,Q,R,S in the given flow chart?

- A.P= Carbohydrate Q= protein R= vitamins S=minerals
- B.P=vitamins Q=mineral R= protein S= carbohydrate
- C.P= protein Q= vitamin R= carbohydrate S= mineral
- D.P= mineral Q=protein R= vitamin S= carbohydrate

Question- 17


Arrange the right sequence of wing movements in birds while flying.

(1)

(2)

(3)

(4)



- A. 4,2,3,1
- B. 2,1,3,4
- C. 2,1,4,3
- D. 4,1,3,2



Question-18.

Write T for true and F for false for the following statements-

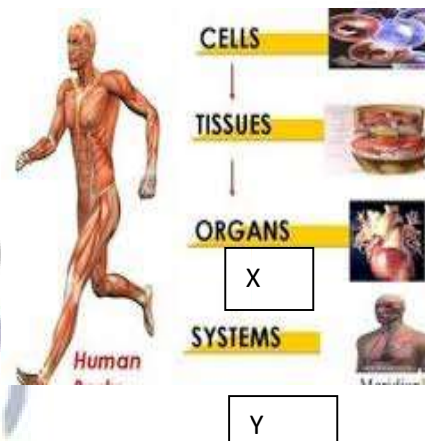
- I. Eating junk food is good for health
- II. Fats protect us from diseases
- III. Houseboats of kashmir are pucca houses
- IV. Raincoat is made from silk which is a natural fibre.

A T,T,T,T

B-T,T,F,F

C- F,F,F,F

D -F,F,T,T,



Question-19

Identify X and Y in the given picture?

- A. X=tissue Y= heart
- B X= organ Y= brain
- C X= heart Y= organ
- D X=tissue Y=organ

Question-20

Identify the part and its function in a plant?

- A. Upper part is root and hold the plant firm
- B lower part is shoot which makes food for plant.
- C upper part is shoot that is photosynthetic
- D lower part is flower that develops into fruits



ANSWER SCHEME FOR MOCK TEST-1_SCIENCE_CLASS-3

1-B	2-B	3-A	4-D	5-A					
6-B	7-A	8-C	9-D	10-D	11-A	12-D	13-C	14-B	15-C
18-A	17-B	18-C	19-D	20-C					

