

**ROUGH WORK**

**GLOBAL TALENT SEARCH EXAMINATION # 5**  
**CLASS – 3<sup>rd</sup>**

***Total Questions : 75*** ***Total Marks :- 300*** ***Time :- 3 Hours***

***Instructions for the candidate :***

Please read the following instructions carefully before opening the Question Booklet :

1. This Question Booklet consists of 75 questions. Subject wise serial order of the questions is as following :

<u>Subject</u>	<u>Serial Order</u>
English	Q.1 – Q.15
Hindi	Q.16 – Q.30
Mathematics	Q.31 – Q.45
Science	Q.46 – Q.60
Mental Ability	Q.61 – Q. 75

2. Each multiple choice question has four options namely (A), (B), (C) and (D). Out of which only ONE option is correct. Each correct answer earns a credit of **4 marks**.
3. **Use black or blue ball point pen only on OMR sheet.** Use of pencil is strictly prohibited.
4. Folding, damaging or leaving any identifiable mark on the OMR sheet is strictly prohibited.
5. No Candidate should possess any document other that **Admit Card** and **Photo Identity Card**.
6. Candidate may take Question Booklet with him/her only after handling over OMR sheet to invigilating staff.
7. Rough work should be done in the blank space provided on the last page of this booklet.
8. From the given 4 alternatives, choose only one alternative and dark the selected circle properly as



***Your Hard Work Leads To Strong Foundation***







**ENGLISH**


1. Mamta is \_\_\_\_\_ honest girl.  
(A) a (B) an  
(C) the (D) No Article
2. Choose the correct Plural of 'Rose'.  
(A) Roses (B) Rosees  
(c) Rosess (D) None of these
3. What is the opposite of 'Dirty' ?  
(A) Cleen (B) Clean  
(C) Clen (D) Cleeen
4. Which of the following is the masculine gender?  
(A) Girl (B) Mother  
(C) Boy (D) Aunt
5. Choose the past form of ' Be'.  
(A) Been (B) Was (C) Bid (D) Be
6. When we ask a question, we end the sentence with a \_\_\_\_\_.  
(A) Full stop (B) Comma  
(C) Question mark (D) All of these
7. An exclamatory sentence ends with a/an \_\_\_\_\_.  
(A) Period (B) Full stop  
(C) Exclamation mark (D) All of these
8. \_\_\_\_\_ Ganga is a holy river.  
(A) A (B) An (C) The (D) No Article
9. Which among the following is a countable noun?  
(A) Milk (B) Petrol  
(C) Water (D) Orange
10. John gave me seven mangoes. In this sentence adjective is \_\_\_\_\_.  
(A) gave (B) John  
(C) seven (D) mangoes
11. This is Payal. \_\_\_\_\_ is a teacher.  
(A) her (B) It (C) this (D) She

If ball 4 and ball 8 are removed, then there are \_\_\_\_\_ balls between ball 3 and ball 7.

- (A) 2 (B) 3 (C) 4 (D) 1

**Direction:** In even of the following examples, if the given pictures are coded as shown below, find the code for given picture

Figure	Code	Figure	Code	Figure	Code
	A		G		Z
	J		K		L

73. What is the code for  ?

- (A) JA (B) JZ (C) KL (D) KJ


74. If 'Star' is called 'Sun', 'Sun' is called 'Moon', 'Moon' is called 'Earth' and 'Earth' is called 'Comet', man lives on\_\_\_\_\_.

- (A) Star (B) Moon (C) Earth (D) Comet

75. If 'Eyes' means 'Nose', 'Nose' means 'Hands', 'Hands' means 'Ears' and 'Ears' means 'Teeth', which organ is used to breathe?


- (A) Eyes (B) Nose (C) Hands (D) Ears

68. Which number will replace the question mark (?)



- (A) 10 (B) 11 (C) 12 (D) 14

Direction (Q. 69 - 70) In the following examples, look at the pictures and choose the correct answers.




69. Which car is before car 58?

- (A) 41 (B) 25 (C) 37 (D) 61

70. Which car is behind car 61?

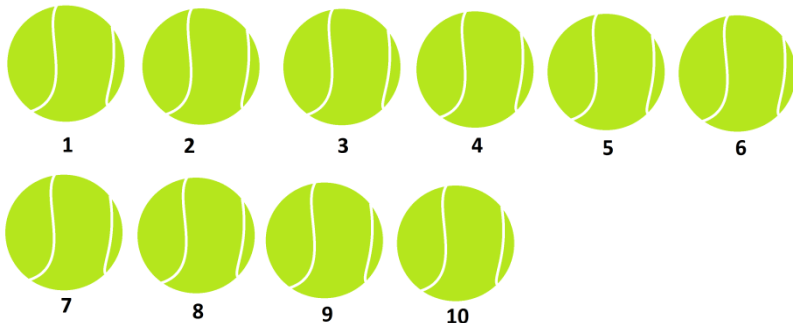
- (A) 23 (B) 37 (C) 25 (D) 13

71. Which object is second to the left of bell?



- (A) Key (B) Ball (C) Banana (D) Book

72. Study the figure carefully.



12. Radha \_\_\_\_\_ Reema are going to the store.

- (A) but (B) so  
(C) and (D) because

13. Choose the adverb in the following sentence.

The stairs creaked loudly.

- (A) stairs (B) loudly  
(C) creaked (D) None of these

14. Ram reads a book \_\_\_\_\_ the library.

- (A) on (B) in  
(C) at (D) behind

15. I \_\_\_\_\_ the Triburie.

- (A) read (B) reads  
(C) is reading (D) None of these

### HINDI

16. वर्णों के निश्चित क्रम को क्या कहते हैं ?

- (A) वर्ण (B) वर्णमाला  
(C) भाषा (D) वाक्य

17. 'दो व्यक्ति बस में बातें कर रहे हैं'—

भाषा का कौन — सा रूप है ?

- (A) सांकेतिक भाषा (B) मौखिक भाषा  
(C) लिखित भाषा (D) कोई रूप नहीं

18. 'वह बहुत अच्छा ..... है।' — वाक्य में उचित लिंग शब्द भरें।



- (A) गायिका (B) गायीका  
(C) गायक (D) गयक

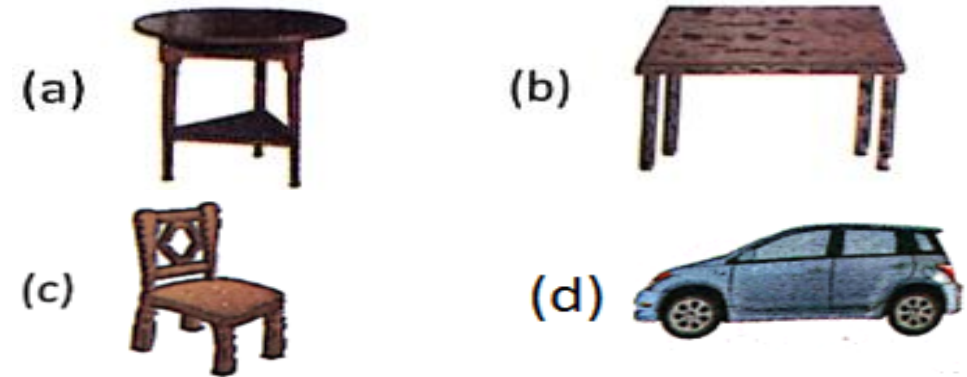
19. निम्न में से सही युग्म चुनिए।

- (A) मित्र — दोस्त (B) भय — बहादुर  
(C) विष — जहर (D) आशा — निराशा


20. निम्न में से किस शब्द में अनुस्वार का प्रयोग हुआ है ?  
 (A) पाँच (B) अतः (C) हंस (D) गाँव
21. 'सेना' शब्द का बहुवचन है –  
 (A) सेनाएँ (B) सेनाएँ (C) सेने (D) सेनाए
22. 'राम दूसरे देश से आने वाली वस्तु का प्रयोग नहीं करता है' – इस वाक्य के लिए एक शब्द बताइए ?  
 (A) स्वदेशी (B) विदेशी (C) अपनी (D) पराई
23. निम्न में से कौन – सा शब्द 'भूमि' का पर्यायवाची नहीं है ?  
 (A) जमीन (B) धरती (C) समीर (D) भू
24. 'दरवाजे पर कोई खड़ा है।' – वाक्य में सर्वनाम शब्द चुनिए।  
 (A) दरवाजे (B) कोई (C) खड़ा (D) पर
25. निम्न में से कौन – सा संज्ञा का भेद नहीं है ?  
 (A) व्यक्तिवाचक संज्ञा (B) जातिवाचक संज्ञा  
 (C) भाववाचक संज्ञा (D) पुरुषवाचक संज्ञा
26. वर्ण कितने प्रकार के होते हैं ?  
 (A) एक (B) दो  
 (C) तीन (D) चार
27. बच्चा माँ व परिवार से जो भाषा सीखता है वह कौन – सी भाषा कहलाती है ?  
 (A) मातृभाषा (B) राष्ट्रभाषा  
 (C) राजभाषा (D) अन्तर्राष्ट्रीय भाषा
28. व्यंजन के साथ लगने वाले स्वर चिह्नों को क्या कहते हैं ?  
 (A) स्वर (B) हलन्त (C) मात्रा (D) व्यंजन
29. विशेषण के कितने भेद होते हैं ?  
 (A) एक (B) दो (C) तीन (D) चार
30. निम्न में से कौन – सा पुल्लिङ्ग शब्द है ?  
 (A) चाबी (B) कार (C) पौधा (D) आँख

### MENTAL ABILITY

61. Which is the 7<sup>th</sup> letter of alphabet?  
 (A) H (B) E (C) G (D) J
62. If alphabet is written in backward form, which letter is at the 6<sup>th</sup> position?  
 (A) F (B) X (C) S (D) U
63.  : Queen ::  : ?  
 (A) Knight (B) Square (C) Book (D) Frog
64. TOMATO is to VEGETABLE as MANGO is to ?  
 (A) EDIBLE (B) JUICE  
 (C) VEGETABLE (D) FRUIT
65. Select the odd one.  
 (A) 19 (B) 8 (C) 14 (D) 18
66. Directions : In each following question, select the odd one.



67. Directions : In the following question, select the group of letters/ numbers(s) to complete the given series.




- (A) 13 (B) 15  
 (C) 16 (D) 14

52. The process of change of water vapour to water by cooling is  
 (A) Evaporation (B) Condensation  
 (C) Melting (D) Freezing
53. Which of the following house is made of a sheet of canvas or nylon  
 (A) Caravan (B) tent house  
 (C) Igloo (D) log house
54. Which of the following is true?  
 (A) A stone can walk on its own.  
 (B) Plants are non living things  
 (C) Plants move from place to place  
 (D) All living things grow on their own
55. Which of the following tree has the largest leaves?  
 (A) Banana (B) Raffia palm  
 (C) Mango (D) Mint
56. Which animal has long sticky tongue to catch insect?  
 (A) Cow (B) honey bee  
 (C) Dog (D) Frog
57. There are small children who are forced to work. This is considered as \_\_\_\_\_  
 (A) child labour (B) small worker  
 (C) small child (D) labour worker
58. Which of the following is incorrect?  
 (A) Postman -- delivers letters  
 (B) Cobbler -- mends shoes  
 (C) Teacher -- maintains law and order  
 (D) Nurse -- Treats people who are ill
59. Cheapest mode of communication is  
 (A) SMS (B) Letter  
 (C) Mobile phone (D) E-mail
60. What is the full form of PIN?  
 (A) Postal Index number (B) Private identification number  
 (C) Public identification number (D) Password Index number

## MATHEMATICS







31. Form the smallest 4— digit number using the digits 5,3,7. Repetition of digits is allowed.  
 (A) 5375 (B) 3375  
 (C) 3357 (D) 3577
32. The Roman numbers for 39 is  
 (A) XXIX (B) XIX  
 (C) XXXIX (D) XXXI
33. Write the amount in figures.  
 Seventy rupees six paise -  
 (A) Rs. 70.60 (B) Rs. 7.60  
 (C) Rs. 70.06 (D) Rs. 76.60
34. The length of rope in a roll is 90 m 50 cm. If 35 m 22 cm of the rope is used, how much length of the rope is left?  
 (A) 125 m 72 cm (B) 55 m 28 cm  
 (C) 125 cm 72 m (D) 65 m 32 cm
35. Look at the clock and write the time




- (A) 15 min past 2. (B) Quarter past 3  
 (C) Quarter to 3 (D) Quarter to 2
36. Divide : 438.42 by 6  
 (A) 7307 (B) 73.07 (C) 737 (D) 73.7
37. Line segment PQ represented as  
 (A)  $\overleftrightarrow{PQ}$  (B)  $\overline{PQ}$  (C)  $\overrightarrow{PQ}$  (D)  $\overrightarrow{AB}$
38. The number of faces in a cylinder are \_\_\_\_\_  
 (A) 2 (B) 6 (C) 1 (D) 3

39. The number of lines of symmetry in letter 'X' is  
(A) 1 (B) 2 (C) 3 (D) 4

Study the pictograph and answer the following question. Pictograph shows the no. of cars Mr. Joseph Repaired

Day	No. of cars repaired
Monday	
Tuesday	
Wednesday	
Thursday	
Friday	
Saturday	
Sunday	

 = 6 Cars

40. How many cars did repair on Thursday  
(A) 18 (B) 30 (C) 12 (D) 42
41. On which day Mr. Joseph did not do any work?  
(A) Wednesday (B) Sunday  
(C) Friday (D) Tuesday
42. By how much 9351 greater than 3726?  
(A) 6435 (B) 13077  
(C) 5625 (D) 14177

43. Simplify :-  $2678 - 1487 + 1456 - 1256$   
(A) 1391 (B) 4134  
(C) 2743 (D) 1391

44. If divisor = 6, quotient = 39, Remainder = 2 then dividend is  
(A) 234 (B) 236  
(C) 230 (D) 240

45. There are 59 racks in a library. Each rack contains 45 books. How many books are there in the library?  
(A) 101 (B) 2520  
(C) 2360 (D) 2655

**SCIENCE**

46. Who among the following is not a family member?  
(A) Grandfather (B) Uncle  
(C) Aunt (D) Teacher
47. Mother's parents is your \_\_\_\_\_  
(A) Maternal patents (B) paternal parents  
(C) Both A & B (D) cousins
48. Dyslexia is a \_\_\_\_\_ disorder.  
(A) Listening (B) learning  
(C) speaking (D) Writing
49. Which language is used by blind people to communicate with others?  
(A) Hearing aids (B) Braille  
(C) Sign language (D) None of these
50. Which nutrient gives us energy to work and play?  
(A) Carbohydrate (B) Proteins  
(C) vitamins (D) minerals
51. Boiling the milk \_\_\_\_\_  
(A) Improves taste  
(B) gives energy to the bacteria  
(C) Kills germs  
(D) is not good for health